

## NATA 2025 Question Paper

**Time Allowed :**3 Hours (180 Minutes)

**Maximum Marks :**200

**Total Questions :**48

### General Instructions for NATA 2025

**Read the following instructions carefully and follow them strictly:**

1. The total duration of the exam is **3 hours (180 minutes)**.
2. The paper consists of two parts: **Part A (Drawing – 80 marks)** and **Part B (MCQs – 120 marks)**.
3. The total number of questions is **48**, and the maximum marks are **200**.
4. **There is no negative marking** for incorrect answers.
5. Candidates must bring their own drawing and coloring materials for Part A.

**1.**

**Mantri Mandir – Where is it located?**

- (A) Chandigarh
  - (B) Mount Abu
  - (C) Jaipur
  - (D) Gandhinagar
- 

**2.**

**“Bullain” – What is the meaning of this word?**

- (A) Blessing
  - (B) Curse
  - (C) Prayer
  - (D) Donation
-

**3.**

**What was the venue for the G-20 summit in India?**

- (A) Mumbai
  - (B) Bengaluru
  - (C) New Delhi
  - (D) Hyderabad
- 

**4.**

**What is the angle between the hour and minute hands at 4:30?**

- (A)  $45^\circ$
  - (B)  $30^\circ$
  - (C)  $60^\circ$
  - (D)  $75^\circ$
- 

**5.**

**How many possible words can be created from the letters R, A, N, D (with repetition)?**

- (A) 12
  - (B) 16
  - (C) 24
  - (D) 36
- 

**6.**

**Brass alloy is made of which metals?**

- (A) Copper and Zinc
  - (B) Copper and Tin
  - (C) Iron and Carbon
  - (D) Aluminium and Zinc
- 

**7.**

**Which of the following is a sedimentary rock?**

- (A) Marble
  - (B) Sandstone
  - (C) Granite
  - (D) Basalt
- 

**8.**

**“Kick the bucket” – Select the correct phrase meaning**

- (A) To fall down
  - (B) To die
  - (C) To start something
  - (D) To succeed
- 

**9.**

**What material is commonly used for doors and windows?**

- (A) Deodar
  - (B) Rosewood
  - (C) Teak
  - (D) Plywood
- 

**10.**

**Identify the location shown in the picture**



- (A) Tamil Nadu

- (B) Karnataka
  - (C) Kerala
  - (D) Andhra Pradesh
- 

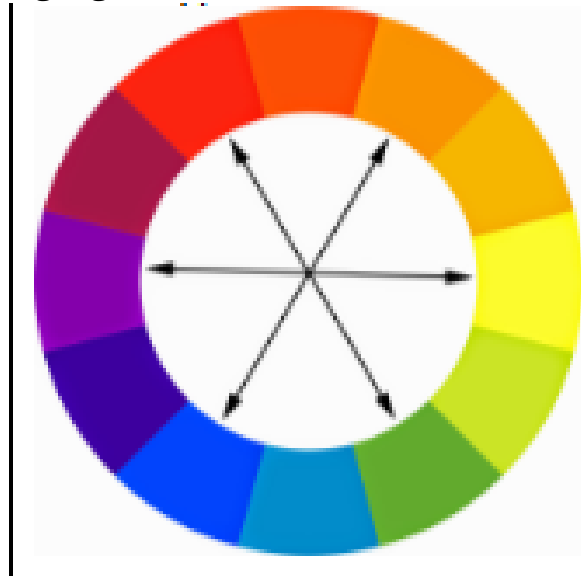
**11.**

**If A is the mother of D, and B is the sister of A, and C is the father of B, then what is the relation of D to C?**

- (A) Grandson
  - (B) Granddaughter
  - (C) Grandchild
  - (D) Son-in-law
- 

**12.**

**What type of color scheme is it? (Refer to the color wheel showing violet and yellow highlighted)**



- (A) Analogous
  - (B) Monochromatic
  - (C) Complementary
  - (D) Triadic
-

**13.**

**The ratio of ages of Rahul and Neha is 3:4. After 5 years, the ratio becomes 4:5. What are their current ages?**

- (A) 15 and 20
  - (B) 18 and 24
  - (C) 21 and 28
  - (D) 24 and 32
- 

**14.**

**What architectural structure balances the bridge weight? (Refer to the image of a truss bridge)**



- (A) Beam
  - (B) Arch
  - (C) Truss
  - (D) Column
- 

**15.**

**How many numbers are divisible by 3 between 50 and 500?**

- (A) 150
  - (B) 149
  - (C) 151
  - (D) 160
- 

**16.**

**The age ratio of two friends is 4:5. The difference in their ages is 6 years. What is the age of the younger friend?**

- (A) 18 years
  - (B) 20 years
  - (C) 24 years
  - (D) 30 years
- 

**17.**

**What is the next number in the sequence? 2, 6, 12, 20, 30, ?**

- (A) 36
  - (B) 40
  - (C) 42
  - (D) 44
- 

**18.**

**What is the sum of interior angles of a polygon with 10 sides?**

- (A)  $1440^\circ$
  - (B)  $1620^\circ$
  - (C)  $1800^\circ$
  - (D)  $1260^\circ$
- 

**19.**

**Identify the location. (Refer to the image of the Lingaraja temple)**



- (A) Odisha
- (B) Gujarat
- (C) Tamil Nadu

(D) Rajasthan

---

20.

**In rainfall-prone areas, which feature is avoided in house design?**

- (A) Sloped roofs
  - (B) Flat roofs
  - (C) Water channels
  - (D) Covered veranda
- 

21. Which civilization is depicted in the image shown?



- (1) Mesopotamian
  - (2) Indus Valley
  - (3) Egyptian
  - (4) Greek
- 

22. What is the correct mirror image of the word "LEFT"?

- (A) T Ɔ E ʌ
  - (B) T E F ʌ
  - (C) ʌ E Ɔ ʌ
  - (D) T F E L
- 

23. If the sum of the interior angles of a polygon is  $1260^\circ$ , how many sides does it have?

- (A) 7
- (B) 9

(C) 10

(D) 8

---

**24. What is a typical roofing material used in traditional Kerala architecture?**

(1) Terracotta tiles

(2) Bamboo sheets

(3) Thatch

(4) Slate

---

**25. What depicts the Buddhist belief of death, rebirth, and afterlife in the stupas?**

(1) Harmika

(2) Torana

(3) Chatra

(4) Medhi

---

**26. What is the Ashoka Pillar according to ancient Buddhist architecture?**

(1) A victory tower

(2) A religious monument with animal capital

(3) A water storage structure

(4) A residential column

---

**27. What is not a part of a window?**

(1) Sill

(2) Mullion

(3) Jamb

(4) Lintel beam

---

**28. Name the building in Dubai shaped like a sail.**

(1) Burj Khalifa

(2) Burj Al Arab

(3) Dubai Frame

(4) Marina 101

---

**29. What is the capital of Andhra Pradesh?**

- (1) Hyderabad
  - (2) Vijayawada
  - (3) Amaravati
  - (4) Visakhapatnam
- 

**30.**

**Identify the signage shown in the image below.**



- (1) No Entry
  - (2) Overtaking Prohibited
  - (3) Speed Limit Ends
  - (4) Horn Prohibited
- 

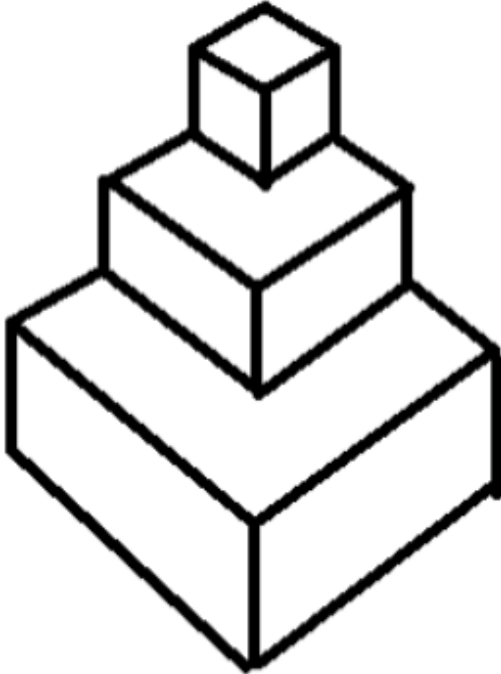
**31. Identify the correct statement for the Logo**



- (1) Taste the Thunder

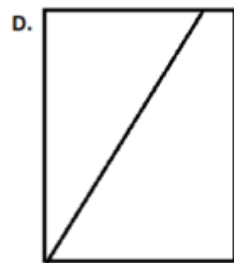
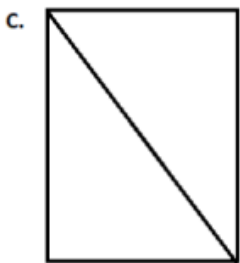
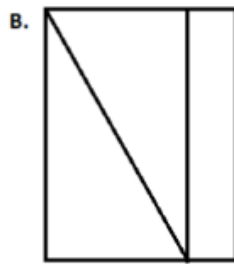
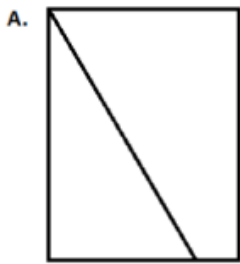
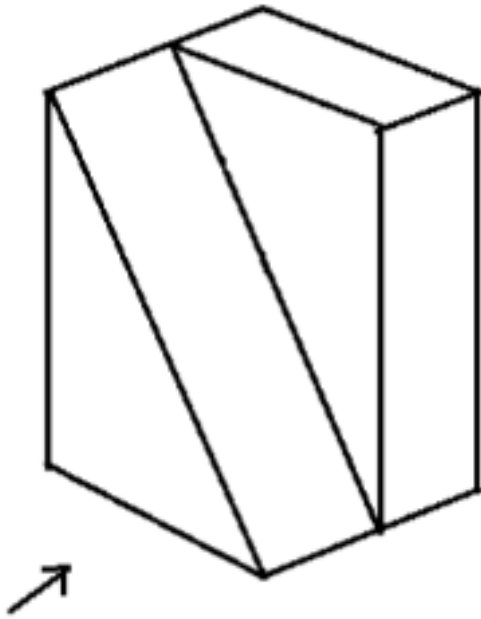
- (2) Taste the Feeling
  - (3) Fresh and Juicy
  - (4) Lime n Lemoni
- 

**32. Count the no of surfaces**



- (1) 11
  - (2) 12
  - (3) 13
  - (4) 10
- 

**33. Identify the correct cross-section of the given 3D shape.**



---

34. Identify the dwelling type.



- (1) Igloo
- (2) Yurt
- (3) Tulou
- (4) Tipi

---

**35. How many light fixtures are there in the given picture?**



- (1) 5
  - (2) 5
  - (3) 7
  - (4) 8
- 

**36. In a family consisting of four living generations (excluding married daughters), the wife is always three years younger than her husband. The siblings in the family have an age gap of three years and there are 2 siblings in the youngest generation. Each father is thirty years older than his eldest child. The present age of the youngest daughter is six years and her father has no siblings. Based on this information, what is the age difference between the youngest child and her grandmother?**

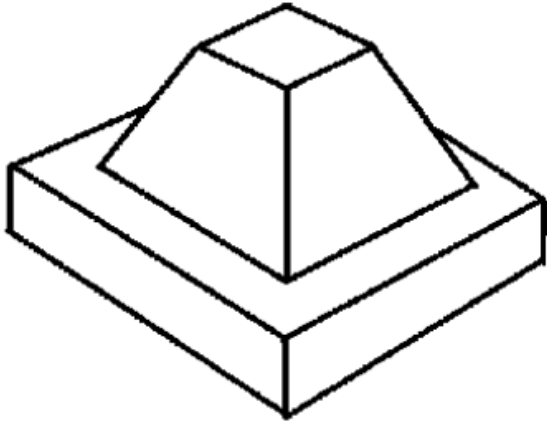
- (1) 69 years
  - (2) 60 years
  - (3) 57 years
  - (4) 63 years
- 

**37. Identify the structure.**



- (1) Taj Mahal
  - (2) Bibi Ka Maqbara
  - (3) Gol Gumbaz
  - (4) Fatehpur Sikri
- 

**38. Count the no of sloping surfaces.**



- (1) 6
  - (2) 8
  - (3) 4
  - (4) None of the above
- 

**39. Identify the monument with its location.**



- (1) Mehrangarh Fort, Jodhpur
  - (2) Gwalior Fort, Madhya Pradesh
  - (3) Red Fort, Delhi
  - (4) Golconda Fort, Hyderabad
- 

**40. Identify the Logo from image**



- (1) Gas Authority of India Limited (GAIL)
  - (2) Hindustan Petroleum Corporation Limited (HPCL)
  - (3) Indian Oil Corporation Limited (IOCL)
  - (4) Bharat Petroleum Corporation Limited (BPCL)
- 

**41. Identify the place shown in the image.**



- (1) Sanchi Stupa, Madhya Pradesh
  - (2) Dhamek Stupa, Sarnath
  - (3) Amaravati Stupa, Andhra Pradesh
  - (4) Mahabodhi Temple, Bihar
- 

**42. Identify the architectural style of the building shown in the image.**



- (1) Romanesque
  - (2) Renaissance
  - (3) Gothic
  - (4) Baroque
- 

**43. Identify the city.**



- (1) Jodhpur
  - (2) Bikaner
  - (3) Jaisalmer
  - (4) Udaipur
- 

**44. Identify the picture from the given image?**



- (1) Marina Bay Boat
  - (2) Marina Bay Dunes
  - (3) Marina Bay drive
  - (4) Marina Bay sands
- 

**45. Which clothing brand has a crocodile logo?**

- (1) Biba
  - (2) ZARA
  - (3) Lacoste
  - (4) Lee Cooper
- 

**46. Where is the Valley of Flowers National Park located?**

- (1) Uttarakhand
  - (2) Maharashtra
  - (3) Himachal Pradesh
  - (4) Jammu
- 

**47. Identify the location of the given building.**



- (A) Elephanta
- (B) Ajanta
- (C) Ellora
- (D) Bhimbetka

---

**48. Which city is situated on the bank of river Yamuna?**

- (1) Agra
- (2) Patna
- (3) Varanasi
- (4) Haridwar

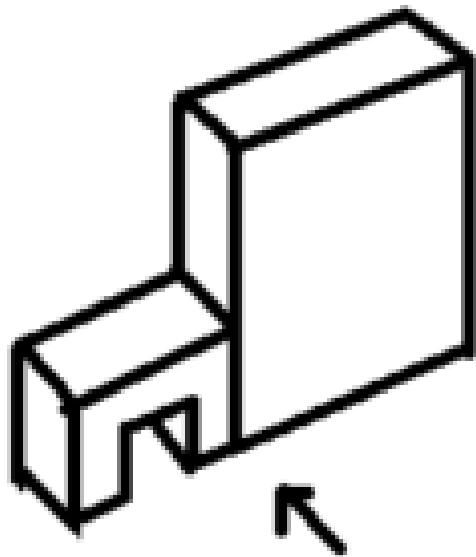
---

**49. What is the name of the 4th gate of Kashi Vishwanath Temple?**

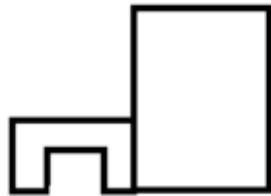
- (1) Dhundiraj Dwar
- (2) Vishwanath Dwar
- (3) Annapurna Dwar
- (4) Saraswati Dwar

---

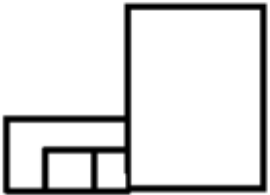
**50. Find the elevation from the given image?**



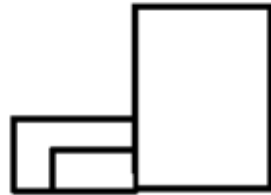
A.



B.



C.



D.