

NEET 2024 Q3 Question Paper

Time Allowed : 200 minutes	Maximum Marks : 720	Total questions : 200
-----------------------------------	----------------------------	------------------------------

General Instructions

Read the following instructions very carefully and strictly follow them:

- (A) The test is of 3 hours 20 minutes duration.
- (B) The question paper consists of 200 questions out of which 180 MCQs must be answered. The maximum marks are 720.
- (C) There are four parts in the question paper consisting of Biology, Physics, Chemistry and Mathematics.
- (D) Each subject will be divided into two sections, A and B which will have 35 and 15 questions respectively. Candidates will have to answer only 10 questions in Section B.
- (E) 4 marks are awarded for each correct answer and 1 mark is deducted for each wrong answer

PHYSICS

Section A

1. In a vernier callipers, $(N + 1)$ divisions of the vernier scale coincide with N divisions of the main scale. If 1 MSD represents 0.1 mm, the vernier constant (in cm) is:

- (1) $\frac{1}{10N}$
 - (2) $\frac{1}{100(N+1)}$
 - (3) $100N$
 - (4) $10(N + 1)$
-

2. If the monochromatic source in Young's double slit experiment is replaced by white light, then:

- (1) Interference pattern will disappear
 - (2) There will be a central dark fringe surrounded by a few coloured fringes
 - (3) There will be a central bright white fringe surrounded by a few coloured fringes
 - (4) All bright fringes will be of equal width
-

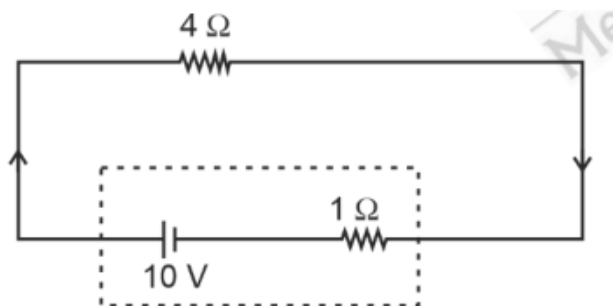
3. A logic circuit provides the output Y as per the following truth table:

A	B	Y
0	0	1
0	1	0
1	0	1
1	1	0

The expression for the output Y is:

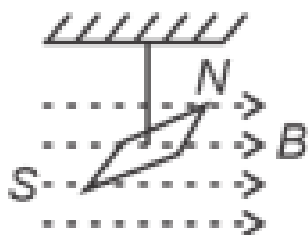
- (A) $A \cdot B + \overline{A}$ (B) $A \cdot \overline{B} + \overline{A}$ (C) \overline{B} (D) B
-

4. The terminal voltage of the battery, whose emf is 10 V and internal resistance 1Ω , when connected through an external resistance of 4Ω as shown in the figure, is:



- (1) 4 V
- (2) 6 V
- (3) 8 V
- (4) 10 V

5. In a uniform magnetic field of 0.049 T, a magnetic needle performs 20 complete oscillations in 5 seconds as shown. The moment of inertia of the needle is $9.8 \times 10^{-6} \text{ kg} \cdot \text{m}^2$. If the magnitude of the magnetic moment of the needle is $x \times 10^{-5} \text{ Am}^2$, then the value of x is:



- (1) $5\pi^2$
- (2) $128\pi^2$
- (3) $50\pi^2$
- (4) $1280\pi^2$

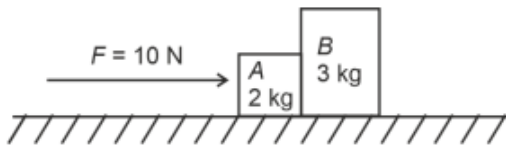
6. A wire of length 'l' and resistance 100Ω is divided into 10 equal parts. The first 5 parts are connected in series while the next 5 parts are connected in parallel. The two combinations are again connected in series. The resistance of this final combination is:

- (1) 26Ω
- (2) 52Ω

(3) $55\ \Omega$

(4) $60\ \Omega$

7. A horizontal force of 10 N is applied to a block A as shown in the figure. The masses of blocks A and B are 2 kg and 3 kg, respectively. The blocks slide over a frictionless surface. The force exerted by block A on block B is:



(1) Zero

(2) 4 N

(3) 6 N

(4) 10 N

Correct Answer: (3)

8. A tightly wound 100 turns coil of radius 10 cm carries a current of 7 A. The magnitude of the magnetic field at the centre of the coil is (Take permeability of free space as $4\pi \times 10^{-7}\ \text{S.I. units}$):

(1) 44 mT

(2) 4.4 T

(3) 4.4 mT

(4) 44 T

9. In an ideal transformer, the turns ratio is $\frac{N_P}{N_S} = \frac{1}{2}$. The ratio $V_S : V_P$ is equal to (the symbols carry their usual meaning):

(1) 1 : 2

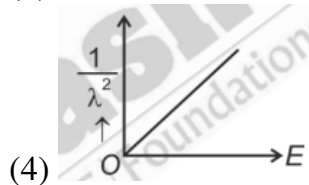
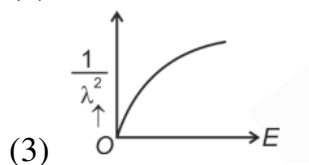
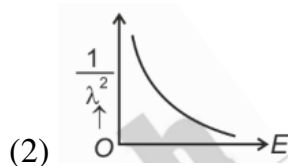
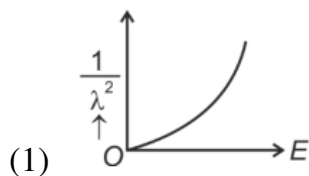
(2) 2 : 1

(3) 1 : 1

(4) 1 : 4

10. The graph below shows the variation of $\frac{1}{\lambda^2}$ and its kinetic energy E , where λ is the de Broglie wavelength of a free particle:

Choose the correct graph:



11. Given below are two statements:

Statement I: Atoms are electrically neutral as they contain equal number of positive and negative charges.

Statement II: Atoms of each element are stable and emit their characteristic spectrum.

In the light of the above statements, choose the most appropriate answer from the options given below:

Choose the most appropriate answer from the options given below:

- (1) Both Statement I and Statement II are correct
- (2) Both Statement I and Statement II are incorrect
- (3) Statement I is correct but Statement II is incorrect
- (4) Statement I is incorrect but Statement II is correct

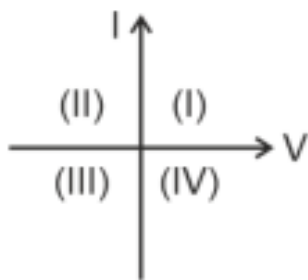
12. A bob is whirled in a horizontal plane by means of a string with an initial speed of ω rpm. The tension in the string is T . If the speed becomes 2ω while keeping the same radius, the tension in the string becomes:

- (1) T
- (2) $4T$
- (3) $\frac{T}{4}$
- (4) $\sqrt{2}T$

13. Consider the following statements A and B and identify the correct answer:

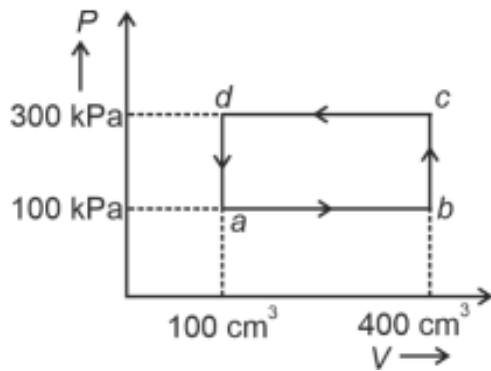
A. For a solar-cell, the I-V characteristics lie in the IV quadrant of the given graph.

B. In a reverse biased pn junction diode, the current measured in (μA) is due to majority charge carriers.



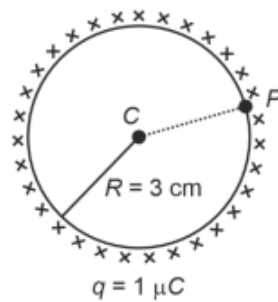
- (1) A is correct but B is incorrect
- (2) A is incorrect but B is correct
- (3) Both A and B are correct
- (4) Both A and B are incorrect

14. A thermodynamic system is taken through the cycle abcda. The work done by the gas along the path bc is:



- (1) Zero
- (2) 30 J
- (3) -90 J
- (4) -60 J

15. A thin spherical shell is charged by some source. The potential difference between the two points C and P (in V) shown in the figure is:



- (1) 3×10^5
- (2) 1×10^5
- (3) 0.5×10^5
- (4) Zero

16. The moment of inertia of a thin rod about an axis passing through its mid point and perpendicular to the rod is 2400 g cm^2 . The length of the 400 g rod is nearly:

- (1) 8.5 cm
- (2) 17.5 cm
- (3) 20.7 cm
- (4) 72.0 cm

17. A particle moving with uniform speed in a circular path maintains:

- (1) Constant velocity
- (2) Constant acceleration
- (3) Constant velocity but varying acceleration
- (4) Varying velocity and varying acceleration

18. If c is the velocity of light in free space, the correct statements about photon among the following are:

- A. The energy of a photon is $E = h\nu$.
- B. The velocity of a photon is c .
- C. The momentum of a photon is $p = \frac{h}{\nu c}$.
- D. In a photon-electron collision, both total energy and total momentum are conserved.
- E. Photon possesses positive charge.

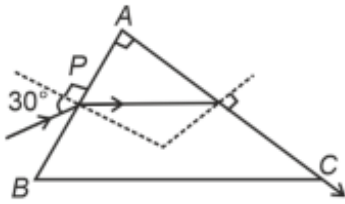
Choose the correct answer from the options given below:

- (1) A and B only
- (2) A, B, C and D only
- (3) A, C and D only
- (4) A, B, D and E only

19. At any instant of time t , the displacement of any particle is given by $x = 2t - 1$ (in SI units) under the influence of a force of 5 N. The value of instantaneous power is (in SI units):

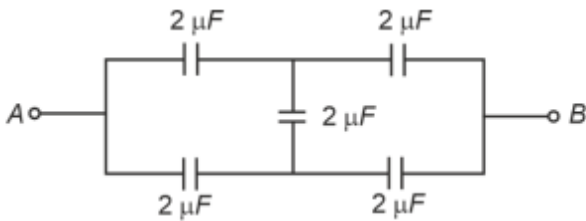
- (1) 10
- (2) 5
- (3) 7
- (4) 6

20. A light ray enters through a right-angled prism at point P with the angle of incidence 30° as shown in figure. It travels through the prism parallel to its base BC and emerges along the face AC. The refractive index of the prism is:



- (1) $\frac{\sqrt{5}}{4}$
- (2) $\frac{\sqrt{5}}{2}$
- (3) $\frac{\sqrt{3}}{4}$
- (4) $\frac{\sqrt{3}}{2}$

21. In the following circuit, the equivalent capacitance between terminal A and terminal B is:



- (1) $2 \mu F$
- (2) $1 \mu F$
- (3) $0.5 \mu F$
- (4) $4 \mu F$

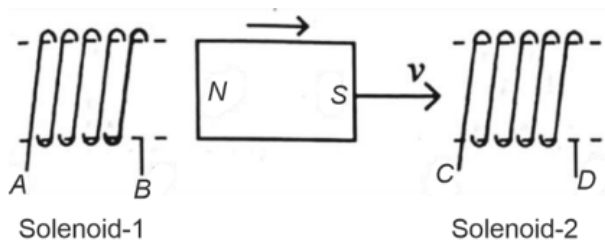
22. The quantities which have the same dimensions as those of solid angle are:

- (1) strain and angle
- (2) stress and angle
- (3) strain and arc
- (4) angular speed and stress

23. The maximum elongation of a steel wire of 1 m length if the elastic limit of steel and its Young's modulus, respectively, are $8 \times 10^8 \text{ N/m}^2$ and $2 \times 10^{11} \text{ N/m}^2$, is:

- (1) 4 mm
 - (2) 0.4 mm
 - (3) 40 mm
 - (4) 8 mm
-

24. In the above diagram, a strong bar magnet is moving towards solenoid-2 from solenoid-1. The direction of induced current in solenoid-1 and that in solenoid-2, respectively, are through the directions:



- (1) AB and DC
 - (2) BA and CD
 - (3) AB and CD
 - (4) BA and DC
-

25. The mass of a planet is $\frac{1}{10}$ th that of the Earth and its diameter is half that of the Earth. The acceleration due to gravity on that planet is:

- (1) 19.6 m/s^2
 - (2) 9.8 m/s^2
 - (3) 4.9 m/s^2
 - (4) 3.92 m/s^2
-

26. Match List-I with List-II.

List-I List-II

(Spectral Lines of Hydrogen for transitions from) (Wavelengths (nm))

- | | |
|---------------------------|------------|
| A. $n_2 = 3$ to $n_1 = 2$ | I. 410.2 |
| B. $n_2 = 4$ to $n_1 = 2$ | II. 434.1 |
| C. $n_2 = 5$ to $n_1 = 2$ | III. 656.3 |
| D. $n_2 = 6$ to $n_1 = 2$ | IV. 486.1 |

Choose the correct answer from the options given below:

- (1) A-II, B-I, C-IV, D-III
 - (2) A-III, B-IV, C-II, D-I
 - (3) A-IV, B-III, C-I, D-II
 - (4) A-I, B-II, C-III, D-IV
-

27. An unpolarised light beam strikes a glass surface at Brewster's angle. Then:

- (1) The reflected light will be partially polarised.
 - (2) The refracted light will be completely polarised.
 - (3) Both the reflected and refracted light will be completely polarised.
 - (4) The reflected light will be completely polarised but the refracted light will be partially polarised.
-

28. Match List-I with List-II.

List-I List-II

- | | |
|------------------|---|
| (Material) | (Susceptibility χ) |
| A. Diamagnetic | I. $\chi = 0$ |
| B. Ferromagnetic | II. $0 \geq \chi \geq -1$ |
| C. Paramagnetic | III. $\chi \gg 1$ |
| D. Non-magnetic | IV. $0 < \chi < \epsilon$ (a small positive number) |

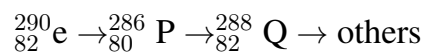
Choose the correct answer from the options given below:

- (1) A-II, B-III, C-IV, D-I
- (2) A-II, B-I, C-III, D-IV
- (3) A-III, B-II, C-I, D-IV
- (4) A-IV, B-III, C-II, D-I

29. Two bodies A and B of same mass undergo completely inelastic one-dimensional collision. The body A moves with velocity v_1 while body B is at rest before the collision. The velocity of the system after the collision is v_2 . The ratio $v_1 : v_2$ is:

- (1) 1 : 2
 - (2) 2 : 1
 - (3) 4 : 1
 - (4) 1 : 4
-

30.



In the nuclear emission stated above, the mass number and atomic number of the product Q respectively, are:

- (1) 280, 81
 - (2) 286, 80
 - (3) 288, 82
 - (4) 286, 81
-

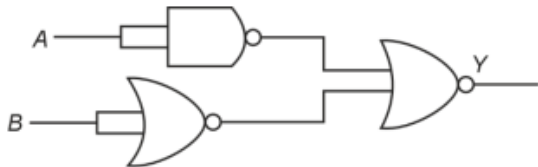
31. If $x = 5 \sin((\pi t) + \frac{\pi}{3})$ represents the motion of a particle executing simple harmonic motion, the amplitude and time period of motion, respectively, are:

- (1) 5 cm, 2 s
 - (2) 5 m, 2 s
 - (3) 5 cm, 1 s
 - (4) 5 m, 1 s
-

32. A thin flat circular disc of radius 4.5 cm is placed gently over the surface of water. If surface tension of water is 0.07 N m^{-1} , then the excess force required to take it away from the surface is:

- (1) 19.8 mN
- (2) 198 N
- (3) 1.98 mN
- (4) 99 N

33. The output (Y) of the given logic gate is similar to the output of an/a:



- (1) NAND gate
- (2) NOR gate
- (3) OR gate
- (4) AND gate

34. Given below are two statements: one is labelled as Assertion A and the other is labelled as Reason R.

Assertion A: The potential (V) at any axial point, at 2 m distance (r) from the centre of the dipole of dipole moment vector P of magnitude $4 \times 10^{-6} \text{ C m}$, is $\pm 9 \times 10^3 \text{ V}$.

(Take $\frac{1}{4\pi\epsilon_0} = 9 \times 10^9 \text{ SI units}$)

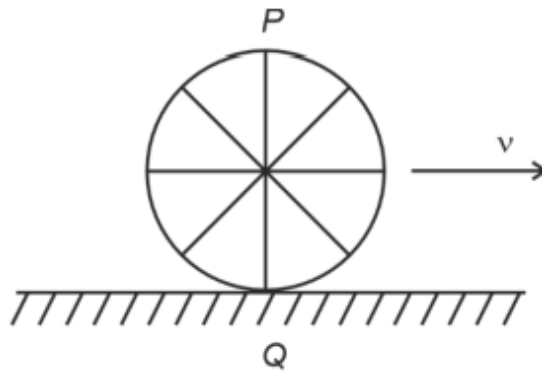
Reason R:

$$V = \pm \frac{2}{4\pi\epsilon_0} \frac{P}{r^2}$$

where r is the distance of any axial point, situated at 2 m from the centre of the dipole.

- (1) Both A and R are true and R is the correct explanation of A.
- (2) Both A and R are true and R is NOT the correct explanation of A.
- (3) A is true but R is false.
- (4) A is false but R is true.

35. A wheel of a bullock cart is rolling on a level road as shown in the figure below. If its linear speed is v in the direction shown, which one of the following options is correct (P and Q are any highest and lowest points on the wheel, respectively)?



- (A) Point P moves slower than point Q (B) Point P moves faster than point Q (C) Both the points P and Q move with equal speed (D) Point P has zero speed
-

Section B

36. A parallel plate capacitor is charged by connecting it to a battery through a resistor. If I is the current in the circuit, then in the gap between the plates:

- (1) There is no current
 - (2) Displacement current of magnitude equal to I flows in the same direction as I
 - (3) Displacement current of magnitude equal to I flows in a direction opposite to that of I
 - (4) Displacement current of magnitude greater than I flows but can be in any direction
-

37. The property which is not of an electromagnetic wave travelling in free space is that:

- (1) They are transverse in nature
 - (2) The energy density in electric field is equal to energy density in magnetic field
 - (3) They travel with a speed equal to $\frac{1}{\sqrt{\mu_0 \epsilon_0}}$
 - (4) They originate from charges moving with uniform speed
-

38. A small telescope has an objective of focal length 140 cm and an eyepiece of focal length 5.0 cm. The magnifying power of the telescope for viewing a distant object is:

- (1) 34
- (2) 28
- (3) 17

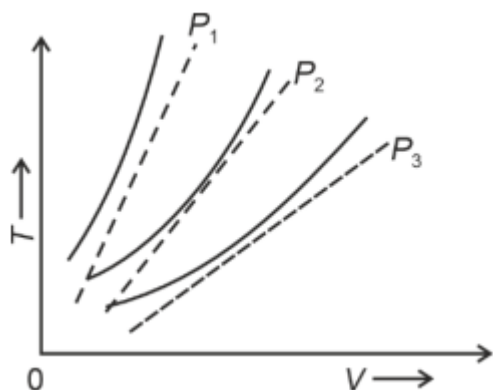
(4) 32

39. Two heaters A and B have power ratings of 1 kW and 2 kW, respectively. These two are first connected in series and then in parallel to a fixed power source. The ratio of power outputs for these two cases is:

- (1) 1 : 1
- (2) 2 : 9
- (3) 1 : 2
- (4) 2 : 3

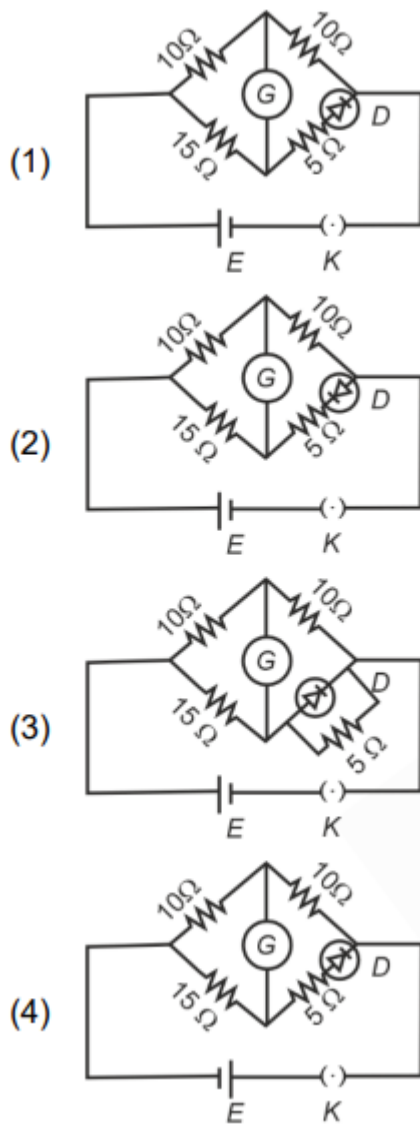
40. The following graph represents the T-V curves of an ideal gas (where T is the temperature and V the volume) at three pressures P_1, P_2 and P_3 compared with those of Charles's law represented as dotted lines.

Then the correct relation is:



- (1) $P_3 > P_2 > P_1$
- (2) $P_1 > P_3 > P_2$
- (3) $P_2 > P_1 > P_3$
- (4) $P_1 > P_2 > P_3$

42. Choose the correct circuit which can achieve the bridge balance.



43. If the mass of the bob in a simple pendulum is increased to thrice its original mass and its length is made half its original length, then the new time period of oscillation is $\frac{x}{2}$ times its original time period. Then the value of x is:

- (1) $\sqrt{3}$
- (2) $\sqrt{2}$
- (3) $2\sqrt{3}$
- (4) 4

44. The minimum energy required to launch a satellite of mass m from the surface of the Earth of mass M and radius R in a circular orbit at an altitude of $2R$ from the

surface of the Earth is:

- (1) $\frac{5}{6} \frac{GmM}{R}$
 - (2) $\frac{2}{3} \frac{GmM}{R}$
 - (3) $\frac{GmM}{2R}$
 - (4) $\frac{GmM}{3R}$
-

45. A sheet is placed on a horizontal surface in front of a strong magnetic pole. A force is needed to:

- A. Hold the sheet there if it is magnetic.
- B. Hold the sheet there if it is non-magnetic.
- C. Move the sheet away from the pole with uniform velocity if it is conducting.
- D. Move the sheet away from the pole with uniform velocity if it is both, non-conducting and non-polar.

Choose the correct statement(s) from the options given below:

- (1) B and D only
 - (2) A and C only
 - (3) A, C and D only
 - (4) C only
-

46. A $10 \mu\text{F}$ capacitor is connected to a 210 V, 50 Hz source as shown in the figure. The peak current in the circuit is nearly ($\pi = 3.14$):

- (1) 0.58 A
 - (2) 0.93 A
 - (3) 1.20 A
 - (4) 0.35 A
-

47. A metallic bar of Young's modulus $0.5 \times 10^{11} \text{ N/m}^2$ and coefficient of linear thermal expansion $10^{-5} \text{ }^\circ\text{C}^{-1}$, length 1 m and area of cross-section 10^{-3} m^2 , is heated from 0°C to 100°C without expansion or bending. The compressive force developed in it is:

- (1) $5 \times 10^3 \text{ N}$
 - (2) $50 \times 10^3 \text{ N}$
 - (3) $100 \times 10^3 \text{ N}$
 - (4) $2 \times 10^3 \text{ N}$
-

48. An iron bar of length L has magnetic moment M . It is bent at the middle of its length such that the two arms make an angle of 60° with each other. The magnetic moment of this new magnet is:

- (1) M
 - (2) $\frac{M}{2}$
 - (3) $2M$
 - (4) $\frac{M}{\sqrt{3}}$
-

49. If the plates of a parallel plate capacitor connected to a battery are moved close to each other, then:

- A. The charge stored in it , increases.
- B. The energy stored in it , decreases.
- C. Its capacitance increases.
- D. The ratio of charge to its potential remains the same.
- E. The product of charge and voltage increases.

Choose the most appropriate answer from the options given below:

- (1) A, B and E only
 - (2) A, C and E only
 - (3) B, D and E only
 - (4) A, B and C only
-

50. A force defined by $F = \alpha t^2 + \beta t$ acts on a particle at a given time t . The factor which is dimensionless, if α and β are constants, is:

- (1) $\frac{\beta t}{\alpha}$

(2) $\frac{\alpha t}{\beta}$

(3) $\alpha\beta t$

(4) $\frac{\alpha\beta}{t}$

CHEMISTRY

Section A

51. Match List I with List II:

List I	List II
A. ethane	I. one σ -bond and two π -bonds
B. ethene	II. two π -bonds
C. carbon molecule, C_2	III. one σ -bond
D. ethyne	IV. one σ -bond and one π -bond

Choose the correct answer from the options given below:

(1) A-I, B-IV, C-II, D-III

(2) A-IV, B-III, C-II, D-I

(3) A-III, B-IV, C-II, D-I

(4) A-III, B-IV, C-I, D-II

52. The Henry's law constant (K_H) values of three gases (A, B, C) in water are 145, 2×10^{-5} and 35 kbar, respectively. The solubility of these gases in water follow the order:

(1) $B > A > C$

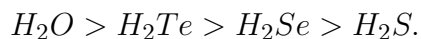
(2) $B > C > A$

(3) $A > C > B$

(4) $A > B > C$

53. Given below are two statements:

Statement I: The boiling point of hydrides of Group 16 elements follow the order



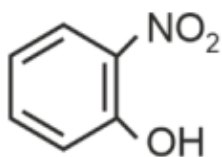
Statement II: On the basis of molecular mass, H_2O is expected to have a lower boiling point than the other members of the group but due to the presence of extensive hydrogen bonding in H_2O , it has a higher boiling point.

In the light of above statements, choose the correct answer from the options given below:

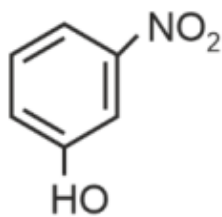
- (1) Both Statement I and Statement II are true
- (2) Both Statement I and Statement II are false
- (3) Statement I is true but Statement II is false
- (4) Statement I is false but Statement II is true

54. Intramolecular hydrogen bonding is present in:

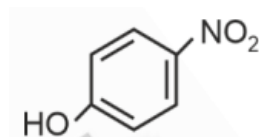
1.



2.



3.



(4) HF

Choose the correct option from the given below:

- (1) A
 - (2) B
 - (3) C
 - (4) D
-

55. Given below are two statements:

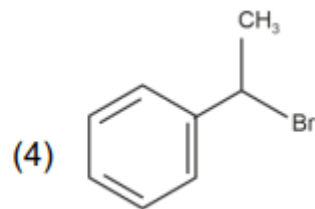
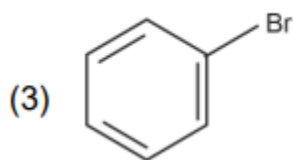
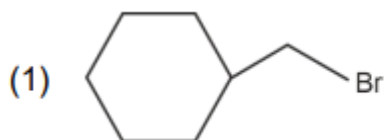
Statement I: The boiling point of three isomeric pentanes follows the order
n-pentane > isopentane > neopentane

Statement II: When branching increases, the molecule attains a shape of sphere. This results in smaller surface area for contact, due to which the intermolecular forces between the spherical molecules are weak, thereby lowering the boiling point.

In the light of the above statements, choose the most appropriate answer from the options given below:

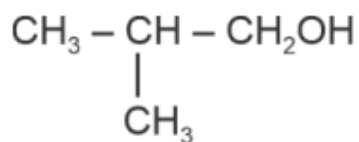
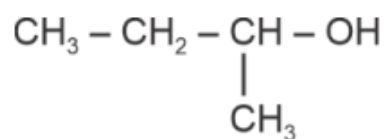
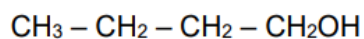
- (1) Both Statement I and Statement II are correct
 - (2) Both Statement I and Statement II are incorrect
 - (3) Statement I is correct but Statement II is incorrect
 - (4) Statement I is incorrect but Statement II is correct
-

56. The compound that will undergo SN1 reaction with the fastest rate is:



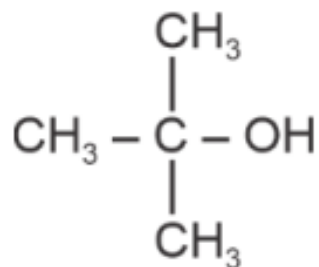
57. Which one of the following alcohols reacts instantaneously with Lucas reagent?

- A.
- B.



C.

D.



58. 1 gram of sodium hydroxide was treated with 25 mL of 0.75 M HCl solution. The mass of sodium hydroxide left unreacted is equal to:

- (1) 750 mg
- (2) 250 mg
- (3) Zero mg
- (4) 200 mg

59. Arrange the following elements in increasing order of first ionization enthalpy:

Li, Be, B, C, N

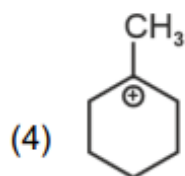
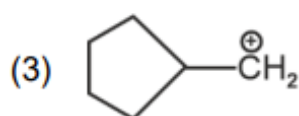
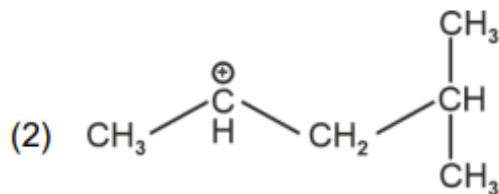
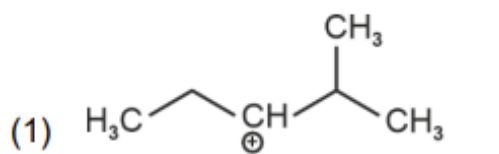
Choose the correct answer from the options given below:

- (1) $\text{Li} < \text{Be} < \text{B} < \text{C} < \text{N}$
- (2) $\text{Li} < \text{B} < \text{Be} < \text{C} < \text{N}$

(3) $\text{Li} < \text{Be} < \text{C} < \text{B} < \text{N}$

(4) $\text{Li} < \text{Be} < \text{N} < \text{B} < \text{C}$

60. The most stable carbocation among the following is:



61. Activation energy of any chemical reaction can be calculated if one knows the value of:

(1) rate constant at standard temperature

- (2) probability of collision
 - (3) orientation of reactant molecules during collision
 - (4) rate constant at two different temperatures
-

62. Given below are two statements:

Statement I: Aniline does not undergo Friedel-Crafts alkylation reaction.

Statement II: Aniline cannot be prepared through Gabriel synthesis.

In the light of the above statements, choose the correct answer from the options given below:

- (1) Both statement I and Statement II are true
 - (2) Both statement I and Statement II are false
 - (3) Statement I is correct but Statement II is false
 - (4) Statement I is incorrect but Statement II is true
-

63. Arrange the following elements in increasing order of electronegativity: N, O, F, C, Si

Choose the correct answer from the options given below:

- (1) $\text{Si} < \text{C} < \text{N} < \text{O} < \text{F}$
 - (2) $\text{Si} < \text{C} < \text{O} < \text{N} < \text{F}$
 - (3) $\text{O} < \text{F} < \text{N} < \text{C} < \text{Si}$
 - (4) $\text{F} < \text{O} < \text{N} < \text{C} < \text{Si}$
-

64. Match List I with List II:

List I	List II
A. 1 mol of H_2O to O_2	I. 3F
B. 1 mol of 4MnO_4^- to Mn^{2+}	II. 2F
C. 1.5 mol of Ca from molten CaCl_2	III. 1F
D. 1 mol of FeO to Fe_2O_3	IV. 5F

Choose the correct answer from the options given below:

- (1) A-II, B-IV, C-I, D-III
 (2) A-III, B-IV, C-I, D-II
 (3) A-II, B-III, C-I, D-IV
 (4) A-III, B-IV, C-II, D-I
-

65. Match List I with List II.

List I (Complex)	List II (Type of isomerism)
A. $[\text{Co}(\text{NH}_3)_5(\text{NO}_2)]\text{Cl}_2$	I. Solvate isomerism
B. $[\text{Co}(\text{NH}_3)_5(\text{SO}_4)]\text{Br}$	II. Linkage isomerism
C. $[\text{Co}(\text{NH}_3)_6][\text{Cr}(\text{CN})_6]$	III. Ionization isomerism
D. $[\text{Co}(\text{H}_2\text{O})_6]\text{Cl}_3$	IV. Coordination isomerism

Choose the correct answer from the options given below:

- (1) A-II, B-III, C-IV, D-I
 (2) A-I, B-III, C-IV, D-II
 (3) A-I, B-IV, C-III, D-II
 (4) A-II, B-IV, C-III, D-I
-

66. Match List I with List II:

List I	List II
A. NH_3	I. Trigonal Pyramidal
B. BrF_5	II. Square Planar
C. XeF_4	III. Octahedral
D. SF_6	IV. Square Pyramidal

Choose the correct answer from the options given below:

- (1) A-I, B-IV, C-II, D-III
- (2) A-II, B-IV, C-III, D-I
- (3) A-III, B-IV, C-I, D-II
- (4) A-I, B-III, C-IV, D-II

69. In which of the following processes does entropy increase?

- A. A liquid evaporates to vapour.
- B. The temperature of a crystalline solid is lowered from 130 K to 0 K.
- C. $2\text{NaHCO}_3(s) \rightarrow \text{Na}_2\text{CO}_3(s) + \text{CO}_2(g) + \text{H}_2\text{O}(g)$
- D. $\text{Cl}_2(g) \rightarrow 2\text{Cl}(g)$

Choose the correct answer from the options given below:

- (1) A and C
- (2) A, B and D
- (3) A, C and D
- (4) C and D

70. Which reaction is NOT a redox reaction?

- (1) $\text{Zn} + \text{CuSO}_4 \rightarrow \text{ZnSO}_4 + \text{Cu}$
- (2) $2\text{KClO}_3 + \text{I}_2 \rightarrow 2\text{KIO}_3 + \text{Cl}_2$
- (3) $\text{H}_2 + \text{Cl}_2 \rightarrow 2\text{HCl}$
- (4) $\text{BaCl}_2 + \text{Na}_2\text{SO}_4 \rightarrow \text{BaSO}_4 + 2\text{NaCl}$

71. Match List I with List II:

List I	List II
A. m_l	III. Orientation of orbital
B. m_s	IV. Orientation of spin of electron
C. l	I. Shape of orbital
D. n	II. Size of orbital

72. 'Spin only' magnetic moment is same for which of the following ions?

- A. Ti^{3+}
- B. Cr^{2+}
- C. Mn^{2+}
- D. Fe^{2+}
- E. Sc^{3+}

Choose the most appropriate answer from the options given below.

- (1) B and D only
- (2) A and E only
- (3) B and C only
- (4) A and D only

73. The highest number of helium atoms is in:

- (1) 4 mol of helium
- (2) 4 u of helium
- (3) 4 g of helium
- (4) 2.271098 L of helium at STP

74. Among Group 16 elements, which one does NOT show -2 oxidation state?

- (1) O
- (2) Se
- (3) Te
- (4) Po

75. The E° value for the $\text{Mn}^{3+}/\text{Mn}^{2+}$ couple is more positive than that of $\text{Cr}^{3+}/\text{Cr}^{2+}$ or $\text{Fe}^{3+}/\text{Fe}^{2+}$ due to the change of:

- (1) d^5 to d^4 configuration
- (2) d^5 to d^2 configuration

(3) d^4 to d^5 configuration

(4) d^3 to d^2 configuration

76. The reagents with which glucose does not react to give the corresponding tests/products are:

A. Tollen's reagent

B. Schiff's reagent

C. HCN

D. NH_2OH

E. NaHSO_3

Choose the correct options from the given below:

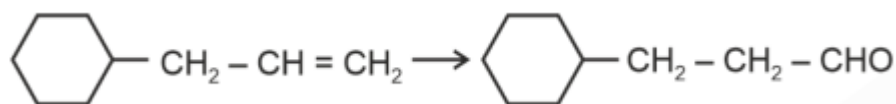
(1) B and C

(2) A and D

(3) B and E

(4) E and D

77. Identify the correct reagents that would bring about the following transformation.



(1) (i) $\text{H}_2\text{O}/\text{H}^+$, (ii) CrO_3

(2) (i) BH_3 , (ii) $\text{H}_2\text{O} / \text{OH}^-$

(3) (i) BH_3 , (ii) $\text{H}_2\text{O} / \text{OH}^-$, (iii) alk. KMnO_4

(4) (i) $\text{H}_2\text{O}/\text{H}^+$, (ii) PCC

78. In which of the following equilibria, K_p and K_c are NOT equal?

(1) $\text{PCl}_5(g) \rightleftharpoons \text{PCl}_3(g) + \text{Cl}_2(g)$

(2) $\text{H}_2(g) + \text{I}_2(g) \rightleftharpoons 2\text{HI}(g)$

(3) $\text{CO}(g) + \text{H}_2(g) \rightleftharpoons \text{CO}_2(g) + \text{H}_2\text{O}(g)$

(4) $\text{Br}_2(g) \rightleftharpoons 2\text{Br}(g)$

79. A compound with a molecular formula of C_6H_{14} has two tertiary carbons. Its IUPAC name is:

- (1) n-hexane
 - (2) 2-methylpentane
 - (3) 2,3-dimethylbutane
 - (4) 2,2-dimethylbutane
-

80. Fehling's solution 'A' is:

- (1) aqueous copper sulphate
 - (2) alkaline copper sulphate
 - (3) alkaline solution of sodium potassium tartrate (Rochelle's salt)
 - (4) aqueous sodium citrate
-

81. Match List I with List II:

List I	List II
A. Isothermal process	I. No heat exchange
B. Isochoric process	II. Carried out at constant temperature
C. Isobaric process	III. Carried out at constant volume
D. Adiabatic process	IV. Carried out at constant pressure

Choose the correct answer from the options given below:

- (1) A-IV, B-III, C-II, D-I
- (2) A-IV, B-II, C-III, D-I
- (3) A-I, B-II, C-III, D-IV
- (4) A-II, B-III, C-IV, D-I

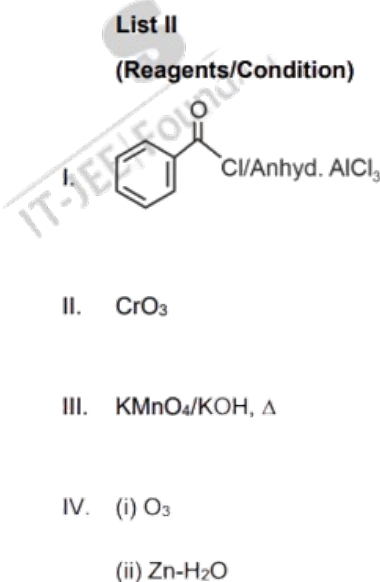
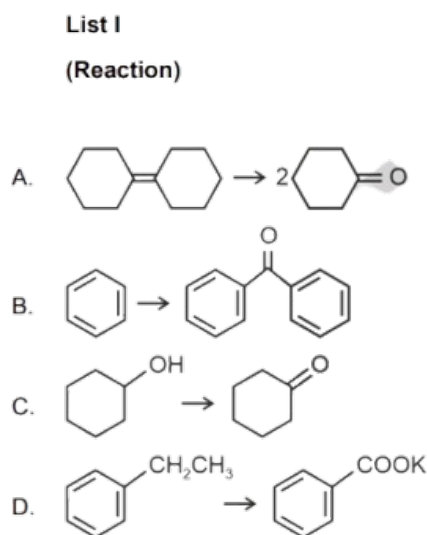
82. On heating, some solid substances change from solid to vapour state without passing through liquid state. The technique used for the purification of such solid substances based on the above principle is known as:

- (1) Crystallization
- (2) Sublimation
- (3) Distillation
- (4) Chromatography

83. On heating, some solid substances change from solid to vapour state without passing through liquid state. The technique used for the purification of such solid substances based on the above principle is known as:

- (1) Crystallization
- (2) Sublimation
- (3) Distillation
- (4) Chromatography

84. Match List I with List II.



Choose the correct answer from the options given below:

Choose the correct answer from the options given below:

- (1) A-IV, B-I, C-III, D-II
 - (2) A-III, B-II, C-II, D-IV
 - (3) A-IV, B-I, C-II, D-III
 - (4) A-I, B-IV, C-I, D-II
-

85. For the reaction $2A \rightleftharpoons B + C$, $K_C = 4 \times 10^{-3}$. At a given time, the composition of the reaction mixture is:

$$[A] = [B] = [C] = 2 \times 10^{-3} \text{ M.}$$

Then, which of the following is correct?

- (1) Reaction is at equilibrium.
 - (2) Reaction has a tendency to go in forward direction.
 - (3) Reaction has a tendency to go in backward direction.
 - (4) Reaction has gone to completion in forward direction.
-

Section B

86. The pair of lanthanoid ions which are diamagnetic is

- (1) Ce^{4+} and Yb^{2+}
 - (2) Ce^{3+} and Eu^{2+}
 - (3) Gd^{3+} and Eu^{3+}
 - (4) Pm^{3+} and Sm^{3+}
-

87. Given below are two statements:

Statement I: $[\text{Co}(\text{NH}_3)_6]^{3+}$ is a homoleptic complex, whereas $[\text{Co}(\text{NH}_3)_4\text{Cl}_2]^+$ is a heteroleptic complex.

Statement II: Complex $[\text{Co}(\text{NH}_3)_6]^{3+}$ has only one kind of ligand, but $[\text{Co}(\text{NH}_3)_4\text{Cl}_2]^+$ has more than one kind of ligand.

In the light of the above statements, choose the most appropriate answer from the options given below:

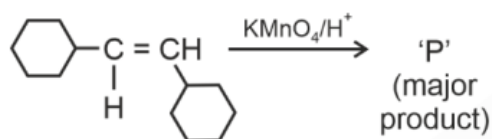
- (1) Both Statement I and Statement II are true.
(2) Both Statement I and Statement II are false.
(3) Statement I is true but Statement II is false.
(4) Statement I is false but Statement II is true.
-

88. Mass in grams of copper deposited by passing 9.6487 A current through a voltmeter containing copper sulphate solution for 100 seconds is

(Given: Molar mass of Cu = 63 g mol⁻¹, 1 F = 96487 C)

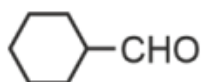
- (1) 3.15 g
(2) 0.315 g
(3) 31.5 g
(4) 0.0315 g
-

89. For the given reaction:

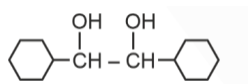


Identify the product 'P' formed in the reaction.

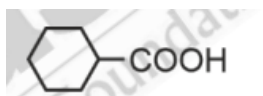
(1)



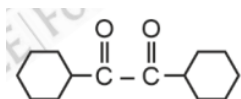
(2)



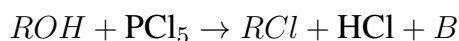
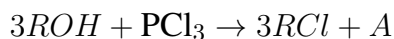
(3)



(4)



90. The products A and B obtained in the following reactions, respectively, are:



- (1) $POCl_3$ and H_3PO_3
- (2) $POCl_3$ and H_3PO_4
- (3) H_3PO_4 and $POCl_3$
- (4) H_3PO_3 and $POCl_3$

91. The rate of a reaction quadruples when temperature changes from 27°C to 57°C . Calculate the energy of activation.

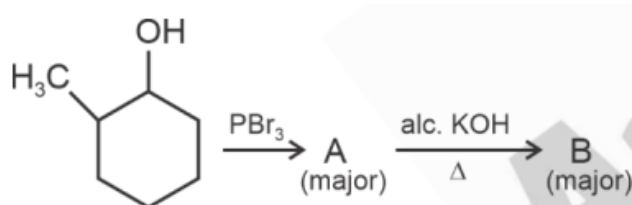
(Given: $R = 8.314 \text{ J K}^{-1} \text{ mol}^{-1}$, $\log 4 = 0.6021$)

- (1) 38.04 kJ/mol
- (2) 380.4 kJ/mol
- (3) 3.80 kJ/mol
- (4) 3804 kJ/mol

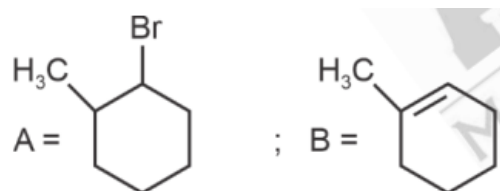
92. During the preparation of Mohr's salt solution (Ferrous ammonium sulphate), which of the following acid is added to prevent hydrolysis of Fe^{2+} ion?

- (1) dilute hydrochloric acid
- (2) concentrated sulphuric acid
- (3) dilute nitric acid
- (4) dilute sulphuric acid

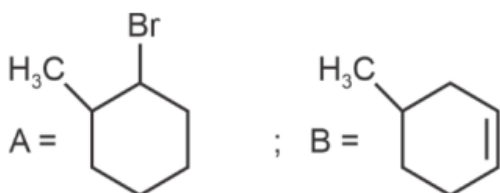
93. Major products A and B formed in the following reaction sequence, are:



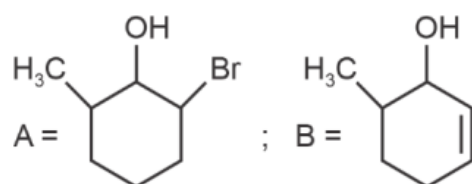
(1)



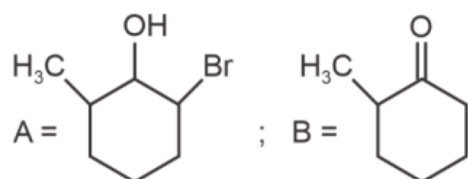
(2)



(3)



(4)



94. The plot of osmotic pressure (Π) vs concentration (mol L^{-1}) for a solution gives a straight line with slope $25.73 \text{ L bar mol}^{-1}$. The temperature at which the osmotic pressure measurement is done is

(Use $R = 0.083 \text{ L bar mol}^{-1} \text{K}^{-1}$)

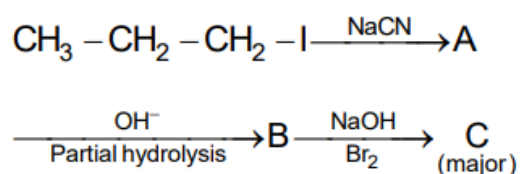
(1) 37°C

- (2) 310°C
 - (3) 25.73°C
 - (4) 12.05°C
-

95. Identify the correct answer.

- (1) Three resonance structures can be drawn for ozone
 - (2) BF_3 has non-zero dipole moment
 - (3) Dipole moment of NF_3 is greater than that of NH_3
 - (4) Three canonical forms can be drawn for CO_3^{2-} ion
-

96. Identify the major product C formed in the following reaction sequence:



- (1) Propylamine
 - (2) Butylamine
 - (3) Butanamide
 - (4) α -bromobutanoic acid
-

97. Given below are certain cations. Using inorganic qualitative analysis, arrange them in increasing group number from 0 to VI.

- A. Al^{3+}
- B. Cu^{2+}
- C. Ba^{2+}
- D. Co^{2+}
- E. Mg^{2+}

Choose the correct answer from the options given below:

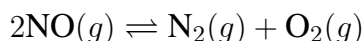
- (1) B, A, D, C, E
 - (2) B, C, A, D, E
 - (3) E, C, D, B, A
 - (4) E, A, B, C, D
-

98. The work done during reversible isothermal expansion of one mole of hydrogen gas at 25°C from pressure of 20 atmosphere to 10 atmosphere is

(Given $R = 2.0 \text{ cal K}^{-1} \text{ mol}^{-1}$)

- (1) 0 calorie
 - (2) -413.14 calories
 - (3) 413.14 calories
 - (4) 100 calories
-

99. Consider the following reaction in a sealed vessel at equilibrium with concentrations of $\text{N}_2 = 3.0 \times 10^{-3} \text{ M}$, $\text{O}_2 = 4.2 \times 10^{-3} \text{ M}$ and $\text{NO} = 2.8 \times 10^{-3} \text{ M}$.



If 0.1 mol L^{-1} of $\text{NO}(g)$ is taken in a closed vessel, what will be the degree of dissociation (α) of $\text{NO}(g)$ at equilibrium?

- (1) 0.00889
 - (2) 0.0889
 - (3) 0.8889
 - (4) 0.717
-

100. A compound X contains 32% of A, 20% of B, and the remaining percentage of C. Then, the empirical formula of X is:

- (1) A_2BC_2
- (2) ABC_3
- (3) AB_2C_2
- (4) ABC_4

BOTANY

Section A

101. Lecithin, a small molecular weight organic compound found in living tissues, is an example of:

- (1) Amino acids
- (2) Phospholipids
- (3) Glycerides
- (4) Carbohydrates

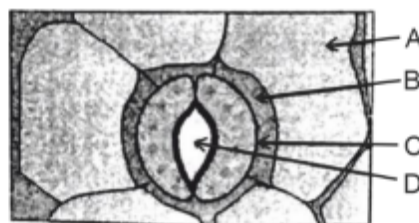
102. How many molecules of ATP and NADPH are required for every molecule of CO₂ fixed in the Calvin cycle?

- (1) 2 molecules of ATP and 3 molecules of NADPH
- (2) 2 molecules of ATP and 2 molecules of NADPH
- (3) 3 molecules of ATP and 3 molecules of NADPH
- (4) 3 molecules of ATP and 2 molecules of NADPH

103. Hind II always cuts DNA molecules at a particular point called recognition sequence and it consists of:

- (A) 8 bp (B) 6 bp (C) 4 bp (D) 10 bp

104. In the given figure, which component has thin outer walls and highly thickened inner walls?



Choose the correct answer from the options given below:

(A) C (B) D (C) A (D) B

105. The cofactor of the enzyme carboxypeptidase is:

(A) Zinc (B) Niacin (C) Flavin (D) Haem

106. The capacity to generate a whole plant from any cell of the plant is called:

(A) Totipotency (B) Micropropagation (C) Differentiation (D) Somatic hybridization

107. Match List I with List II:

List I	List II
A. <i>Rhizopus</i>	1. Mushroom
B. <i>Ustilago</i>	II. Smut fungus
C. <i>Puccinia</i>	III. Bread mould
D. <i>Agaricus</i>	IV. Rust fungus

Choose the correct answer from the options given below:

(A) A-III, B-II, C-IV, D-I (B) A-I, B-III, C-II, D-IV (C) A-III, B-II, C-I, D-IV (D) A-IV, B-III, C-II, D-I

108. Given below are two statements:

Statement I: Bt toxins are insect group specific and coded by a gene cry IAc.

Statement II: Bt toxin exists as inactive protoxin in *B. thuringiensis*. However, after ingestion by the insect, the inactive protoxin gets converted into active form due to acidic pH of the insect gut.

In the light of the above statements, choose the most appropriate answer from the options given below:

- (1) Both Statement I and Statement II are true
- (2) Both Statement I and Statement II are false
- (3) Statement I is true but Statement II is false
- (4) Statement I is false but Statement II is true

109. Which of the following is an example of an actinomorphic flower?

(A) Datura (B) Cassia (C) Pisum (D) Sesbania

110. The type of conservation in which the threatened species are taken out from their natural habitat and placed in special settings where they can be protected and given special care is called:

(A) in-situ conservation (B) Biodiversity conservation (C) Semi-conservative method (D) Sustainable development

111. Identify the set of correct statements:

A. The flowers of Vallisneria are colourful and produce nectar.

B. The flowers of water lily are not pollinated by water.

C. In most of water-pollinated species, the pollen grains are protected from wetting.

D. Pollen grains of some hydrophytes are long and ribbon-like.

E. In some hydrophytes, the pollen grains are carried passively inside water.

Choose the correct answer from the options given below:

(A) C, D and E only (B) A, B, C and D only (C) A, C, D and E only (D) B, C, D and E only

112. The lactose present in the growth medium of bacteria is transported to the cell by the action of:

(A) Beta-galactosidase (B) Acetylase (C) Permease (D) Polymerase

113. Match List I with List II:

List I	List II
<i>A. Clostridium butylicum</i>	<i>I. Ethanol</i>
<i>B. Saccharomyces cerevisiae</i>	<i>II. Streptokinase</i>
<i>C. Trichoderma polysporum</i>	<i>III. Butyric acid</i>
<i>D. Streptococcus sp.</i>	<i>IV. Cyclosporin-A</i>

Choose the correct answer from the options given below:

(A) A-III, B-I, C-II, D-IV (B) A-II, B-IV, C-III, D-I (C) A-III, B-I, C-IV, D-II (D) A-IV, B-I,

114. The equation of Verhulst-Pearl logistic growth is:

$$\frac{dN}{dt} = rN \left[\frac{K - N}{K} \right]$$

From this equation, K indicates:

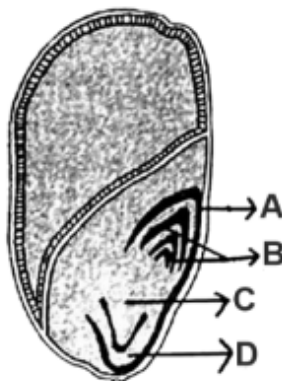
Choose the correct answer from the options given below:

(A) Intrinsic rate of natural increase (B) Biotic potential (C) Carrying capacity (D) Population density

115. Auxin is used by gardeners to prepare weed-free lawns. But no damage is caused to grass as auxin:

(A) promotes apical dominance. (B) promotes abscission of mature leaves only. (C) does not affect mature monocotyledonous plants. (D) can help in cell division in grasses, to produce growth.

116. Identify the part of the seed from the given figure which is destined to form root when the seed germinates.



(A) A (B) B (C) C (D) D

117. Given below are two statements:

Statement I: Parenchyma is living but collenchyma is dead tissue.

Statement II: Gymnosperms lack xylem vessels but the presence of xylem vessels is the characteristic of angiosperms.

In the light of the above statements, Choose the correct answer from the options given below:

(A) Both Statement I and Statement II are true (B) Both Statement I and Statement II are false (C) Statement I is true but Statement II is false (D) Statement I is false but Statement II is true

118. These are regarded as major causes of biodiversity loss:

- A. Over exploitation
- B. Co-extinction
- C. Mutation
- D. Habitat loss and fragmentation
- E. Migration

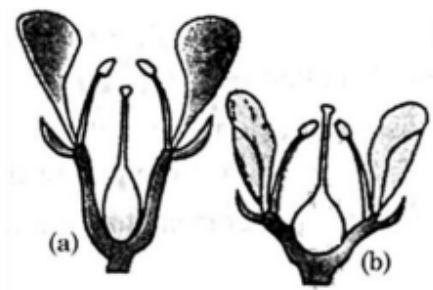
Choose the correct option:

(A) A, C and D only (B) A, B, C and D only (C) A, B and E only (D) A, B and D only

119. Which one of the following is not a criterion for classification of fungi?

(A) Morphology of mycelium (B) Mode of nutrition (C) Mode of spore formation (D) Fruiting body

120. Identify the type of flowers based on the position of calyx, corolla, and androecium with respect to the ovary from the given figures (a) and (b):



Choose the correct answer from the options given below:

(A) (a) Epigynous; (b) Hypogynous (B) (a) Hypogynous; (b) Epigynous (C) (a) Perigynous; (b) Epigynous (D) (a) Perigynous; (b) Perigynous

121. List of endangered species was released by:

(A) GEAC (B) WWF (C) FOAM (D) IUCN

122. What is the fate of a piece of DNA carrying only the gene of interest which is transferred into an alien organism?

- A. The piece of DNA would be able to multiply itself independently in the progeny cells of the organism.
- B. It may get integrated into the genome of the recipient.
- C. It may multiply and be inherited along with the host DNA.
- D. The alien piece of DNA is not an integral part of chromosome.
- E. It shows ability to replicate.

Choose the correct answer from the options given below:

(A) A and B only (B) D and E only (C) B and C only (D) A and E only

123. Which one of the following can be explained on the basis of Mendel's Law of Dominance?

- A. Out of one pair of factors one is dominant and the other is recessive.
- B. Alleles do not show any expression and both the characters appear as such in F₂ generation.
- C. Factors occur in pairs in normal diploid plants.
- D. The discrete unit controlling a particular character is called factor.
- E. The expression of only one of the parental characters is found in a monohybrid cross.

Choose the correct answer from the options given below:

(A) A, B and C only (B) A, C, D and E only (C) B, C and D only (D) A, B, C, D and E

124. Inhibition of Succinic dehydrogenase enzyme by malonate is a classical example of:

- (1) Cofactor inhibition
 - (2) Feedback inhibition
 - (3) Competitive inhibition
 - (4) Enzyme activation
-

125. Formation of interfascicular cambium from fully developed parenchyma cells is an

example for:

(A) Differentiation (B) Redifferentiation (C) Dedifferentiation (D) Maturation

126. Spindle fibers attach to kinetochores of chromosomes during:

(A) Prophase (B) Metaphase (C) Anaphase (D) Telophase

127. Tropical regions show greatest level of species richness because:

A. Tropical latitudes have remained relatively undisturbed for millions of years, hence more time was available for species diversification.

B. Tropical environments are more seasonal.

C. More solar energy is available in tropics.

D. Constant environments promote niche specialization.

E. Tropical environments are constant and predictable.

Choose the correct answer from the options given below:

(A) A, C, D and E only (B) A and B only (C) A, B and E only (D) A, B and D only

128. Given below are two statements:

Statement I: Chromosomes become gradually visible under light microscope during leptotene stage.

Statement II: The beginning of diplotene stage is recognized by dissolution of synaptonemal complex.

In the light of the above statements, choose the correct answer from the options given below:

(A) Both Statement I and Statement II are true (B) Both Statement I and Statement II are false (C) Statement I is true but Statement II is false (D) Statement I is false but Statement II is true

129. Match List I with List II:

List I	List II
A.Nucleolus	<i>I</i> .Site of formation of glycolipid
B.Centriole	<i>II</i> .Organization like the cartwheel
C.Leucoplasts	<i>III</i> .Site for active ribosomal RNA synthesis
D.Golgi apparatus	<i>IV</i> .For storing nutrients

Choose the correct answer from the options given below:

(A) A-III, B-II, C-IV, D-I (B) A-II, B-III, C-I, D-IV (C) A-III, B-IV, C-II, D-I (D) A-I, B-II, C-III, D-IV

130. Bulliform cells are responsible for:

- (1) Inward curling of leaves in monocots
 - (2) Protecting the plant from salt stress
 - (3) Increased photosynthesis in monocots
 - (4) Providing large spaces for storage of sugars
-

131. A pink flowered Snapdragon plant was crossed with a red flowered Snapdragon plant. What type of phenotype/s is/are expected in the progeny?

- (1) Only red flowered plants
 - (2) Red flowered as well as pink flowered plants
 - (3) Only pink flowered plants
 - (4) Red, Pink as well as white flowered plants
-

132. A transcription unit in DNA is defined primarily by the three regions in DNA and these are with respect to upstream and downstream end:

Choose the correct answer from the options given below:

(A) Repressor, Operator gene, Structural gene (B) Structural gene, Transposons, Operator gene (C) Inducer, Repressor, Structural gene (D) Promoter, Structural gene, Terminator

133. In a plant, black seed color (BB/Bb) is dominant over white seed color (bb). In order to find out the genotype of the black seed plant, with which of the following

genotype will you cross it?

(A) BB (B) bb (C) Bb (D) BB/Bb

134. Which of the following are required for the dark reaction of photosynthesis?

A. Light

B. Chlorophyll

C. Co₂

D. ATP

E. NADPH

(A) A, B and C only (B) B, C and D only (C) C, D and E only (D) D and E only

135. Match List I with List II:

List I	List II
A. Two or more alternative forms of a gene	1. Back cross
B. Cross of F ₁ progeny with homozygous recessive parent	II. Ploidy
C. Cross of F ₁ progeny with any of the parents	III. Allele
D. Number of chromosome sets in plant	IV. Test cross

Choose the correct answer from the options given below:

(A) A-I, B-II, C-III, D-IV (B) A-II, B-I, C-III, D-IV (C) A-III, B-IV, C-I, D-II (D) A-IV, B-III, C-II, D-I

Section B

136. The DNA present in chloroplast is:

(1) Linear, double stranded

(2) Circular, double stranded

(3) Linear, single stranded

(4) Circular, single stranded

137. Match List I with List II

List I	List II
<i>A.</i> Robert May	<i>I.</i> Species-Area relationship
<i>B.</i> Alexander von Humboldt	<i>II.</i> Long term ecosystem experiment using outdoor plots
<i>C.</i> Paul Ehrlich	<i>III.</i> Global species diversity at about 7 million
<i>D.</i> David Tilman	<i>IV.</i> Rivet popper hypothesis

Choose the correct answer from the options given below:

- (1) A-II, B-III, C-I, D-IV
- (2) A-III, B-I, C-IV, D-II
- (3) A-I, B-III, C-II, D-IV
- (4) A-III, B-IV, C-II, D-I

138. Match List I with List II

List I	List II
<i>A.</i> Rose	<i>I.</i> Twisted aestivation
<i>B.</i> Pea	<i>II.</i> Perigynous flower
<i>C.</i> Cotton	<i>III.</i> Drupe
<i>D.</i> Mango	<i>IV.</i> Marginal placentation

Choose the correct answer from the options given below:

- (1) A-II, B-IV, C-I, D-III
- (2) A-I, B-II, C-III, D-IV
- (3) A-IV, B-III, C-II, D-I
- (4) A-II, B-III, C-IV, D-I

139. Which of the following statement is correct regarding the process of replication in *E. coli*?

- (1) The DNA dependent DNA polymerase catalyses polymerization in one direction that is $3' \rightarrow 5'$

- (2) The DNA dependent RNA polymerase catalyses polymerization in one direction, that is $5' \rightarrow 3'$
- (3) The DNA dependent DNA polymerase catalyses polymerization in $5' \rightarrow 3'$ as well as $3' \rightarrow 5'$ direction
- (4) The DNA dependent DNA polymerase catalyses polymerization in $5' \rightarrow 3'$ direction
-

140. Identify the correct description about the given figure:



- (1) Wind pollinated plant inflorescence showing flowers with well exposed stamens.
- (2) Water pollinated flowers showing stamens with mucilaginous covering.
- (3) Cleistogamous flowers showing autogamy.
- (4) Compact inflorescence showing complete autogamy.
-

141. Match List I with List II:

List-I	List-II
<i>A.Citricacidcycle</i>	<i>I.Cytoplasm</i>
<i>B.Glycolysis</i>	<i>II.Mitochondrialmatrix</i>
<i>C.Electrontransportsystem</i>	<i>III.Intermembranespaceofmitochondria</i>
<i>D.Protongradient</i>	<i>IV.Innermitochondrialmembrane</i>

142. Read the following statements and choose the set of correct statements:

In the members of Phaeophyceae,

- A. Asexual reproduction occurs usually by biflagellate zoospores.
- B. Sexual reproduction is by oogamous method only.

- C. Stored food is in the form of carbohydrates which is either mannitol or laminarin.
 D. The major pigments found are chlorophyll a, c and carotenoids and xanthophyll.
 E. Vegetative cells have a cellulosic wall, usually covered on the outside by gelatinous coating of algin.

Choose the correct answer from the options given below:

- (1) A, B, C and D only
 (2) B, C, D and E only
 (3) A, C, D and E only
 (4) A, B, C and E only

143. In an ecosystem if the Net Primary Productivity (NPP) of first trophic level is $100x$ ($\text{kcal m}^{-2} \text{yr}^{-1}$), what would be the GPP (Gross Primary Productivity) of the third trophic level of the same ecosystem?

- (1) $\frac{x}{10} \text{ kcal m}^{-2} \text{yr}^{-1}$
 (2) $x \text{ kcal m}^{-2} \text{yr}^{-1}$
 (3) $10x \text{ kcal m}^{-2} \text{yr}^{-1}$
 (4) $\frac{100x}{3x} \text{ kcal m}^{-2} \text{yr}^{-1}$

144. Match List-I with List-II

List-I	List-II
A. GLUT – 4	I. Hormone
B. Insulin	II. Enzyme
C. Trypsin	III. Intercellular ground substance
D. Collagen	IV. Enables glucose transport into cells

Choose the correct answer from the options given below:

- (1) A-IV, B-I, C-II, D-III
 (2) A-I, B-II, C-III, D-IV
 (3) A-II, B-III, C-IV, D-I
 (4) A-III, B-IV, C-I, D-II

145. Identify the step in tricarboxylic acid cycle, which does not involve oxidation of substrate.

- (1) Malic acid \rightarrow Oxaloacetic acid
 - (2) Succinic acid \rightarrow Malic acid
 - (3) Succinyl-CoA \rightarrow Succinic acid
 - (4) Isocitrate \rightarrow α -ketoglutaric acid
-

146. Given below are two statements:

Statement I: In C₃ plants, some O₂ binds to RuBisCO, hence CO₂ fixation is decreased.

Statement II: In C₄ plants, mesophyll cells show very little photorespiration while bundle sheath cells do not show photorespiration.

In the light of the above statements, choose the correct answer from the options given below:

- (1) Both Statement I and Statement II are true
 - (2) Both Statement I and Statement II are false
 - (3) Statement I is true but Statement II is false
 - (4) Statement I is false but Statement II is true
-

147. Match List-I with List-II

List-I	List-II
<i>A.Monoadelphous</i>	<i>I.Citrus</i>
<i>B.Diadelphous</i>	<i>II.Pea</i>
<i>C.Polyadelphous</i>	<i>III.Lily</i>
<i>D.Epiphyllous</i>	<i>IV.China – rose</i>

Choose the correct answer from the options given below:

- (1) A-IV, B-II, C-I, D-III
- (2) A-IV, B-I, C-II, D-III
- (3) A-I, B-II, C-IV, D-III
- (4) A-III, B-I, C-IV, D-II

148. Match List I with List II

List I	List II
<i>A.</i> Frederick Griffith	<i>I.</i> Genetic code
<i>B.</i> Francois Jacob & Jacque Monod	<i>II.</i> Semi-conservative mode of DNA replication
<i>C.</i> Har Gobind Khorana	<i>III.</i> Transformation
<i>D.</i> Meselson & Stahl	<i>IV.</i> Lac operon

Choose the correct answer from the options given below:

- (1) A-III, B-II, C-I, D-IV
- (2) A-III, B-IV, C-I, D-II
- (3) A-II, B-III, C-IV, D-I
- (4) A-IV, B-I, C-II, D-III

149. Which of the following are fused in somatic hybridization involving two varieties of plants?

- (1) Callus
- (2) Somatic embryos
- (3) Protoplasts
- (4) Pollens

150. Spraying sugarcane crop with which of the following plant growth regulators, increases the length of stem, thus, increasing the yield?

- (1) Auxin
- (2) Gibberellin
- (3) Cytokinin
- (4) Absciscic acid

ZOOLOGY

Section A

151. Following are the stages of pathway for conduction of an action potential through the heart

- A. AV bundle
- B. Purkinje fibers
- C. AV node
- D. Bundle branches
- E. SA node

Choose the correct sequence of pathway from the options given below:

- (1) E-C-A-D-B
 - (2) A-E-C-B-D
 - (3) B-D-E-C-A
 - (4) E-A-D-B-C
-

152. In both sexes of cockroach, a pair of jointed filamentous structures called anal cerci are present on

- (1) 5th segment
 - (2) 10th segment
 - (3) 8th and 9th segment
 - (4) 11th segment
-

153. The flippers of the Penguins and Dolphins are the example of the

- (1) Adaptive radiation
 - (2) Natural selection
 - (3) Convergent evolution
 - (4) Divergent evolution
-

154. Which of the following is not a component of Fallopian tube?

- (1) Uterine fundus

- (2) Isthmus
- (3) Infundibulum
- (4) Ampulla

155. Given below are some stages of human evolution.

Arrange them in correct sequence. (Past to Recent)

- A. Homo habilis
- B. Homo sapiens
- C. Homo neanderthalensis
- D. Homo erectus

Choose the correct sequence of human evolution from the options given below:

- (1) D-A-C-B
- (2) B-A-D-C
- (3) C-B-D-A
- (4) A-D-C-B

156. Which of the following is not a steroid hormone?

- (1) Cortisol
- (2) Testosterone
- (3) Progesterone
- (4) Glucagon

157. Match List I with List II:

List I	List II
<i>A.α – Iantitrypsin</i>	<i>I.Cotton bollworm</i>
<i>B.Cry IAb</i>	<i>II.ADA deficiency</i>
<i>C.Cry IAc</i>	<i>III.Emphysema</i>
<i>D.Enzyme replacement therapy</i>	<i>IV.Corn borer</i>

Choose the correct answer from the options given below:

- (1) A-II, B-I, C-IV, D-III
 - (2) A-III, B-I, C-II, D-IV
 - (3) A-III, B-IV, C-I, D-II
 - (4) A-II, B-IV, C-I, D-III
-

158. Following are the stages of cell division:

- A. Gap 2 phase
- B. Cytokinesis
- C. Synthesis phase
- D. Karyokinesis
- E. Gap 1 phase

Choose the correct sequence of stages from the options given below:

- (1) C-E-D-A-B
 - (2) E-B-D-A-C
 - (3) B-D-E-A-C
 - (4) E-C-A-D-B
-

159. Which one of the following factors will not affect the Hardy-Weinberg equilibrium?

- (1) Genetic recombination
 - (2) Genetic drift
 - (3) Gene migration
 - (4) Constant gene pool
-

160. Which of the following are Autoimmune disorders?

- A. Myasthenia gravis
- B. Rheumatoid arthritis
- C. Gout
- D. Muscular dystrophy
- E. Systemic Lupus Erythematosus (SLE)

Choose the most appropriate answer from the options given below:

- (1) A,B D only
- (2) A,B E only
- (3) B,C E only
- (4) C,D E only

161. Match List I with List II:

List I	List II
<i>A.Typhoid</i>	<i>I.Fungus</i>
<i>B.Leishmaniasis</i>	<i>II.Nematode</i>
<i>C.Ringworm</i>	<i>III.Protozoa</i>
<i>D.Filariasis</i>	<i>IV.Bacteria</i>

Choose the correct answer from the options given below:

- (1) A-I, B-III, C-II, D-IV
- (2) A-IV, B-III, C-I, D-II
- (3) A-III, B-I, C-IV, D-II
- (4) A-II, B-IV, C-III, D-I

162. Match List I with List II:

List I	List II
<i>A.Expiratory capacity</i>	<i>I.Expiratory reserve volume + Tidal volume + Inspiratory volume</i>
<i>B.Functional residual capacity</i>	<i>II.Tidal volume + Expiratory reserve volume</i>
<i>C.Vital capacity</i>	<i>III.Tidal volume + Inspiratory reserve volume</i>
<i>D.Inspiratory capacity</i>	<i>IV.Expiratory reserve volume + Residual volume</i>

Choose the correct answer from the options given below:

- (1) A-II, B-IV, C-I, D-III
- (2) A-III, B-II, C-IV, D-I

(3) A-II, B-I, C-IV, D-III

(4) A-I, B-III, C-II, D-IV

163. Match List I with List II:

List I	List II
A.Down's syndrome	I.11th chromosome
B. α – Thalassemia	II.'X' chromosome
C. β – Thalassemia	III.21st chromosome
D.Klinefelter's syndrome	IV.16th chromosome

Choose the correct answer from the options given below :

164. Given below are two statements:

Statement I: FSH acts upon ovarian follicles in female and Leydig cells in male.

Statement II: Growing ovarian follicles secrete estrogen in female while interstitial cells secrete androgen in male human beings.

Choose the correct answer from the options given below:

- (1) Both Statement I and Statement II are true and R is the correct explanation of A
 - (2) Both Statement I and Statement II are true but R is NOT the correct explanation of A
 - (3) Statement I is true but Statement II is false
 - (4) Statement I is false but Statement II is true
-

165. Match List I with List II:

List I	List II
A.Pleurobrachia	I.Mollusca
B.Radula	II.Ctenophora
C.Stomochord	III.Osteichthyes
D.Air bladder	IV.Hemichordata

Choose the correct answer from the options given below:

- (1) A-IV, B-II, C-III, D-I

- (2) A-II, B-I, C-IV, D-III
 (3) A-II, B-IV, C-I, D-III
 (4) A-IV, B-III, C-II, D-I

166. Match List I with List II:

List I (Sub-Phases of Prophase I)	List II (Specific Characters)
<i>A</i> .Diakinesis	<i>I</i> .Synaptonemal complex formation
<i>B</i> .Pachytene	<i>II</i> .Completion of terminalisation of chiasmata
<i>C</i> .Zygotene	<i>III</i> .Chromosomes look like thin threads
<i>D</i> .Leptotene	<i>IV</i> .Appearance of recombination nodules

Choose the correct answer from the options given below:

- (1) A-IV, B-II, C-III, D-I
 (2) A-I, B-II, C-IV, D-III
 (3) A-II, B-IV, C-I, D-II
 (4) A-IV, B-III, C-II, D-I

167. The “Ti plasmid” of *Agrobacterium tumefaciens* stands for

- (1) Tumour inhibiting plasmid
 (2) Tumor independent plasmid
 (3) Tumor inducing plasmid
 (4) Temperature independent plasmid

168. Match List I with List II:

List I	List II
<i>A</i> .Cocaine	<i>I</i> .Effective sedative in surgery
<i>B</i> .Heroin	<i>II</i> .Cannabis sativa
<i>C</i> .Morphine	<i>III</i> .Erythroxylum
<i>D</i> .Marijuana	<i>IV</i> .Papaver somniferum

- Choose the correct answer from the options given below: (1) A-IV, B-III, C-I, D-II
 (2) A-I, B-III, C-II, D-IV
 (3) A-II, B-I, C-III, D-IV
 (4) A-III, B-IV, C-I, D-II
-

169. Which one is the correct product of DNA dependent RNA polymerase to the given template?

3'TACATGGCAAATATCCATTCA5'

- (1) 5' AUGUACCGUUUAUAGGUAAGU 3'
 (2) 5' AUGUAAAGUUUAUAGGUAAGU 3'
 (3) 5' AUGUACCGUUUAUAGGGAAGU 3'
 (4) 5' ATGTACCGTTTATAGGTAAGT 3'
-

170. Match List I with List II:

List I	List II
A.Pons	<i>I</i> .Provides additional space for Neurons, regulates posture and balance.
B.Hypothalamus	<i>II</i> .Controls respiration and gastric secretions.
C.Medulla	<i>III</i> .Connects different regions of the brain.
D.Cerebellum	<i>IV</i> .Neurosecretory cells

Choose the correct answer from the options given below:

- (1) A-II, B-III, C-I, D-IV
 (2) A-III, B-IV, C-II, D-I
 (3) A-I, B-III, C-II, D-IV
 (4) A-II, B-I, C-III, D-IV
-

171. Match List I with List II:

List I	List II
<i>A</i> .Lipase	<i>I</i> .Peptide bond
<i>B</i> .Nuclease	<i>II</i> .Ester bond
<i>C</i> .Protease	<i>III</i> .Glycosidic bond
<i>D</i> .Amylase	<i>IV</i> .Phosphodiester bond

Choose the correct answer from the options given below:

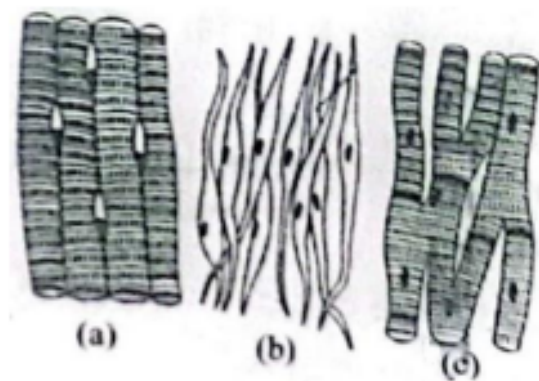
- (1) A-IV, B-II, C-III, D-I
- (2) A-III, B-II, C-I, D-IV
- (3) A-II, B-IV, C-I, D-III
- (4) A-IV, B-I, C-III, D-II

172. Which of the following is not a natural/traditional contraceptive method?

- (1) Coitus interruptus
- (2) Periodic abstinence
- (3) Lactational amenorrhea
- (4) Vaults

Correct Answer: (4)

173. Three types of muscles are given as a, b, and c. Identify the correct matching pair along with their location in the human body:



Muscle Name/Location:

- (1) (a) Smooth - Toes, (b) Skeletal – Legs, (c) Cardiac – Heart
 - (2) (a) Skeletal - Triceps, (b) Smooth – Stomach, (c) Cardiac – Heart
 - (3) (a) Skeletal - Biceps, (b) Involuntary – Intestine, (c) Smooth – Heart
 - (4) (a) Involuntary – Nose tip, (b) Skeletal – Bone, (c) Cardiac – Heart
-

174. Which of the following statements is incorrect?

- (1) A bio-reactor provides optimal growth conditions for achieving the desired product
 - (2) Most commonly used bio-reactors are of stirring type
 - (3) Bio-reactors are used to produce small scale bacterial cultures
 - (4) Bio-reactors have an agitator system, an oxygen delivery system and foam control system
-

175. Given below are two statements:

One is labelled as Assertion A and the other is labelled as Reason R:

Assertion A: Breast-feeding during initial period of infant growth is recommended by doctors for bringing a healthy baby.

Reason R: Colostrum contains several antibodies absolutely essential to develop resistance for the new born baby. **In the light of the above statements, choose the most appropriate answer from the options given below:**

- (1) Both A and R are correct and R is the correct explanation of A
 - (2) Both A and R are correct but R is NOT the correct explanation of A
 - (3) A is correct but R is not correct
 - (4) A is not correct but R is correct
-

176. Which of the following factors are favourable for the formation of oxyhaemoglobin in alveoli?

- (1) High pO_2 and High pCO_2
- (2) High pO_2 and Lesser H^+ concentration
- (3) Low pCO_2 and High H^+ concentration
- (4) Low pCO_2 and High temperature

177. Match List I with List II:

List I	List II
<i>A.</i> Common cold	<i>I.</i> Plasmodium
<i>B.</i> Haemozoin	<i>II.</i> Typhoid
<i>C.</i> Widal test	<i>III.</i> Rhinoviruses
<i>D.</i> Allergy	<i>IV.</i> Dust mites

Choose the correct answer from the options given below :

(1) A-II, B-IV, C-III, D-I

(2) A-I, B-III, C-II, D-IV

(3) A-III, B-I, C-II, D-IV

(4) A-IV, B-II, C-III, D-I

178. Consider the following statements:

A. Annelids are true coelomates

B. Poriferans are pseudocoelomates

C. Aschelminthes are acoelomates

D. Platyhelminthes are pseudocoelomates

179. Match List I with List II:

List I	List II
<i>A.</i> Non-medicated IUD	<i>I.</i> Multiload 375
<i>B.</i> Copper releasing IUD	<i>II.</i> Progestogens
<i>C.</i> Hormone releasing IUD	<i>III.</i> Lippes loop
<i>D.</i> Implants	<i>IV.</i> LNG-20

Choose the correct answer from the options given below:

(1) A-III, B-I, C-II, D-IV

(2) A-I, B-III, C-IV, D-II

(3) A-IV, B-I, C-II, D-III

(4) A-III, B-I, C-IV, D-II

180. Given below are two statements:

Statement I: In the nephron, the descending limb of the loop of Henle is impermeable to water and permeable to electrolytes.

Statement II: The proximal convoluted tubule is lined by simple columnar brush border epithelium and increases the surface area for reabsorption.

In the light of the above statements, choose the correct answer from the option given below:

- (1) Both Statement I and Statement II are true
 - (2) Both Statement I and Statement II are false
 - (3) Statement I is true but Statement II is false
 - (4) Statement I is false but Statement II is true
-

181. The following diagram showing restriction sites in E. coli cloning vector pBR322.

Find the role of 'X' and 'Y' genes:

- (1) The gene 'X' is responsible for resistance to antibiotics and 'Y' for protein involved in the replication of Plasmid.
 - (2) The gene 'X' is responsible for controlling the copy number of the linked DNA and 'Y' for protein involved in the replication of Plasmid.
 - (3) The gene 'X' is for protein involved in replication of Plasmid and 'Y' for resistance to antibiotics.
 - (4) Gene 'X' is responsible for recognition sites and 'Y' is responsible for antibiotic resistance.
-

182. Match List I with List II:

List I	List II
<i>A.Axoneme</i>	<i>I.Centriole</i>
<i>B.Cartwheel pattern</i>	<i>II.Cilia and flagella</i>
<i>C.Crista</i>	<i>III.Chromosome</i>
<i>D.Satellite</i>	<i>IV.Mitochondria</i>

Choose the correct answer from the options given below:

- (1) A-IV, B-III, C-II, D-I
- (2) A-IV, B-II, C-III, D-I
- (3) A-II, B-IV, C-I, D-III
- (4) A-II, B-I, C-IV, D-III

183. Match List I with List II:

List I	List II
<i>A.Pterophyllum</i>	<i>I.Hag fish</i>
<i>B.Myxine</i>	<i>II.Saw fish</i>
<i>C.Pristis</i>	<i>III.Angel fish</i>
<i>D.Exocoetus</i>	<i>IV.Flying fish</i>

Choose the correct answer from the options given below:

- (1) A-II, B-I, C-III, D-IV
- (2) A-III, B-I, C-II, D-IV
- (3) A-IV, B-I, C-II, D-III
- (4) A-III, B-II, C-I, D-IV

184. Match List I with List II:

List I	List II
<i>A.Fibrous joints</i>	<i>I.Adjacent vertebrae, limited movement</i>
<i>B.Cartilaginous joints</i>	<i>II.Humerus and Pectoral girdle, rotational movement</i>
<i>C.Hinge joints</i>	<i>III.Skull, don't allow any movement</i>
<i>D.Ball and socket joints</i>	<i>IV.Knee, help in locomotion</i>

Choose the correct answer from the options given below:

- (1) A-IV, B-II, C-III, D-I
- (2) A-I, B-III, C-II, D-IV
- (3) A-II, B-III, C-I, D-IV
- (4) A-III, B-I, C-IV, D-II

185. Given below are two statements:

Statement I: The presence or absence of hymen is not a reliable indicator of virginity.

Statement II: The hymen is torn during the first coitus only.

Choose the correct answer from the options given below:

- (1) Both Statement I and Statement II are true
- (2) Both Statement I and Statement II are false
- (3) Statement I is true but Statement II is false
- (4) Statement I is false but Statement II is true

Section B

186. Given below are two statements:

Statement I: Gause's competitive exclusion principle states that two closely related species competing for different resources cannot exist indefinitely.

Statement II: According to Gause's principle, during competition, the inferior will be eliminated. This may be true if resources are limiting.

List I	List II
A. The structures used for storing of food	I. Gizzard
B. Ring of 6-8 blind tubules at junction of foregut and midgut.	II. Gastric Caeca
C. Ring of 100-150 yellow coloured thin filaments at junction of midgut and hindgut.	III. Malpighian tubules
D. The structures used for grinding the food.	IV. Crop

187. Match List I with List II related to digestive system of cockroach.

Choose the correct answer from the options given below:

- (1) A-IV, B-II, C-III, D-I
- (2) A-I, B-II, C-III, D-IV
- (3) A-IV, B-III, C-II, D-I
- (4) A-III, B-II, C-IV, D-I

188. The following are the statements about non-chordates:

- A. Pharynx is perforated by gill slits.
- B. Notochord is absent.
- C. Central nervous system is dorsal.
- D. Heart is dorsal if present.
- E. Post anal tail is absent.

189. Choose the correct statement given below regarding juxta medullary nephron.

- A. Juxta medullary nephrons are located in the columns of Bertini.
- B. Renal corpuscle of juxta medullary nephron lies in the outer portion of the renal medulla.
- C. Loop of Henle of juxta medullary nephron runs deep into medulla.
- D. Juxta medullary nephrons outnumber the cortical nephrons.

190. Given below are two statements:

Statement I: The cerebral hemispheres are connected by nerve tract known as corpus callosum.

Statement II: The brain stem consists of the medulla oblongata, pons and cerebrum.

In the light of the above statements, choose the most appropriate answer from the options given below:

- (1) Both Statement I and Statement II are correct.
 - (2) Both Statement I and Statement II are incorrect.
 - (3) Statement I is correct but Statement II is incorrect.
 - (4) Statement I is incorrect but Statement II is correct.
-

191. Given below are two statements:

Statement I: Bone marrow is the main lymphoid organ where all blood cells including lymphocytes are produced.

Statement II: Both bone marrow and thymus provide micro environments for the development and maturation of T-lymphocytes.

In the light of the above statements, choose the most appropriate answer from the options given below:

- (1) Both Statement I and Statement II are correct.
 - (2) Both Statement I and Statement II are incorrect.
 - (3) Statement I is correct but Statement II is incorrect.
 - (4) Statement I is incorrect but Statement II is correct.
-

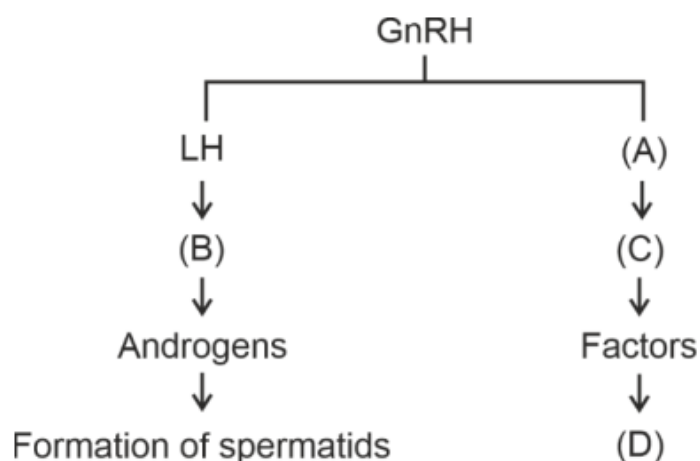
192. Regarding catalytic cycle of an enzyme action, select the correct sequential steps:

- A. Substrate enzyme complex formation.
- B. Free enzyme ready to bind with another substrate.
- C. Release of products.
- D. Chemical bonds of the substrate broken.
- E. Substrate binding to active site.

Choose the correct answer from the options given below:

- (1) E, A, D, C, B
- (2) A, E, B, D, C
- (3) B, A, C, D, E
- (4) E, D, C, B, A

193. Identify the correct option (A), (B), (C), (D) with respect to spermatogenesis.



- (1) FSH, Leydig cells, Sertoli cells, spermiogenesis.
- (2) ICSH, Interstitial cells, Leydig cells, spermiogenesis.
- (3) FSH, Sertoli cells, Leydig cells, spermatogenesis.
- (4) ICSH, Leydig cells, Sertoli cells, spermatogenesis.

194. Match List I with List II:

List I	List II
A. Mesozoic Era	I. Lower invertebrates
B. Proterozoic Era	II. Fish & Amphibia
C. Cenozoic Era	III. Birds & Reptiles
D. Paleozoic Era	IV. Mammals

Choose the correct answer from the options given below:

- (1) A-II, B-I, C-III, D-IV
- (2) A-III, B-I, C-II, D-IV
- (3) A-I, B-II, C-IV, D-III
- (4) A-III, B-I, C-IV, D-II

195. Match List I with List II:

Choose the correct answer from the options given below:

List I	List II
A. Unicellular glandular epithelium	I. Salivary glands
B. Compound epithelium	II. Pancreas
C. Multicellular glandular epithelium	III. Goblet cells of alimentary canal
D. Endocrine glandular epithelium	IV. Moist surface of buccal cavity

- (1) A-II, B-I, C-III, D-IV
(2) A-IV, B-III, C-I, D-II
(3) A-III, B-IV, C-I, D-II
(4) A-II, B-I, C-IV, D-III

196. Match List I with List II:

List I	List II
A. RNA polymerase III	I. snRNPs
B. Termination of transcription	II. Promotor
C. Splicing of Exons	III. Rho factor
D. TATA box	IV. SnRNAs, tRNA

Choose the correct answer from the options given below:

- (1) A-II, B-IV, C-I, D-III
(2) A-III, B-II, C-IV, D-I
(3) A-III, B-IV, C-I, D-II
(4) A-IV, B-III, C-I, D-II

197. As per ABO blood grouping system, the blood group of father is B+, mother is A+ and child is O+. Their respective genotype can be

- A. $I^{B_i}/I^{A_i}/ii$
B. $I^B I^B / I^A I^A / ii$
C. $I^A I^B / i I^A / I^B i$
D. $I^{A_i}/I^{B_i}/I^{A_i}$

Choose the most appropriate answer from the options given below : (1) A only

(2) B only

(3) C and B only

(4) D and E only

198. Given below are two statements:

Statement I: Mitochondria and chloroplasts are both double membrane-bound organelles.

Statement II: The inner membrane of mitochondria is relatively less permeable, as compared to the chloroplast membrane.

In the light of the above statements, choose the most appropriate answer from the options given below:

(1) Both Statement I and Statement II are correct.

(2) Both Statement I and Statement II are incorrect.

(3) Statement I is correct but Statement II is incorrect.

(4) Statement I is incorrect but Statement II is correct.

199. Given below are two statements:

Statement I: Mitochondria and chloroplasts are both double membrane-bound organelles.

Statement II: The inner membrane of mitochondria is relatively less permeable, as compared to the chloroplast membrane.

In the light of the above statements, choose the most appropriate answer from the options given below:

(1) Both Statement I and Statement II are correct.

(2) Both Statement I and Statement II are incorrect.

(3) Statement I is correct but Statement II is incorrect.

(4) Statement I is incorrect but Statement II is correct.

200. Match List I with List II:

Choose the correct answer from the options given below:

List I	List II
A. Exophthalmic goiter	I. Excess secretion of cortisol, moon face & hyperglycemia.
B. Acromegaly	II. Hypo-secretion of thyroid hormone and stunted growth.
C. Cushing's syndrome	III. Hyper secretion of thyroid hormone & protruding eyeballs.
D. Cretinism	IV. Excessive secretion of growth hormone.

(1) A-I, B-III, C-II, D-IV

(2) A-IV, B-II, C-I, D-III

(3) A-III, B-IV, C-II, D-I

(4) A-III, B-IV, C-I, D-II
